



परमाणु ऊर्जा शिक्षण संस्था  
Atomic Energy Education Society

वार्षिक परीक्षा- अभ्यास प्रश्नपत्र-I / Annual Examination Practice Paper-I

कक्षा / Class : IV

अवधि / Duration : 3hrs

विषय / Subject : ENGLISH अधिकतम अंक / Maximum Marks: 80M

-----  
**READING SECTION [20M]**

A1. Read the following passage and answer the questions given.

The earliest books were written by hand. Two thousand years ago in India, birch bark (bhojapatra) and palm leaves (talapatra) were used as pages. A pen and black ink were used to write on birch bark. A sharp iron spike was used for writing on palm leaves. Holes were drilled through the leaves and the book was held together by a string.

1. State **true / false**. [5\*1=5M]

In olden days, books were written using a computer. \_\_\_\_\_

2. From the **passage**, pick the **correct word** and fill in the blanks.

The birch bark is also known as \_\_\_\_\_ and the palm leaves are also known as \_\_\_\_\_.

3. From the passage, find the **opposite** of the **word in brackets** and fill in the blanks.

I had used a \_\_\_\_\_ knife to cut the meat. (blunt)

4. Give one word for the following.

the outer covering of the tree \_\_\_\_\_

5. Answer the following question.

In the earliest books, what was used as pages in India?

---

---

A2. Read the following poem and answer the questions.

[5\*1=5M]

If I had a donkey

And he wouldn't go

Would I wallop him?

No,no,no

I'd find a little hay

And give him some corn

Then he'd be the best donkey

That ever was born.

1. From the **poem**, pick out the **synonym** of  
to beat hard \_\_\_\_\_

2. Give the **antonym** of 'best' x \_\_\_\_\_

3. Would the poet beat the donkey?

---

---

4. What would the poet feed the donkey?

---

---

5. Pick the most suitable word from the bracket and fill in the blanks.

The poet is a \_\_\_\_\_ boy. [cruel, naughty, kind]

A3. Read the passage given and answer the questions. [10\*1=10M]

Ants are little bugs that live together in big groups, like a team. They talk to each other using special smells called pheromones. If one ant finds food, it leaves a smelly trail for others to follow.

Each ant has a job. Some ants go out to find food, while others build and take care of the babies. There is a kind of ant called the leaf-cutter ant. They cut small pieces of leaves and bring them to their home. Why? They use the leaves to grow yummy fungus, like a farmer growing food.

Ants are smart too! They can find their way around and solve problems. Even though they are small, ants teach us about teamwork and about being clever. Watching ants working is like peeking into a tiny world full of busy workers.

1. Fill in the blanks with words **from the passage**. [1M]

The \_\_\_\_\_ ants cut small pieces of leaves and bring them home.

2. Pick out one word **from the passage** which **means** [1M]

to work together in a team \_\_\_\_\_

3. Find the **antonym** of the given words **from the passage**. [1 \* ½= 1M]

foolish x \_\_\_\_\_ huge x \_\_\_\_\_

4. State **true / false**. [2 \* 1=2M]

(a) Ants grow their own food. [                    ]

(b) Ants can solve problems. [                    ]

5. Complete the sentences from the passage. [2 \* 1=2M]

(a) Watching ants is like peeking \_\_\_\_\_

---

(b) If one ant finds food, \_\_\_\_\_  
\_\_\_\_\_

6. What do ants teach us? [1M]

\_\_\_\_\_  
\_\_\_\_\_

7. How do ants talk to each other? [1M]

\_\_\_\_\_  
\_\_\_\_\_

8. Each ant has a job. Name at least one job that ants carry out. [1M]

\_\_\_\_\_

### TEXTUAL SECTION [10M]

B.1. The best times to water the plants are the \_\_\_\_\_ and \_\_\_\_\_.  
[2\* ½ = 1M]

B.2. Name the poet / author of the [2\* ½ = 1M]

(a) The Naughty Boy \_\_\_\_\_

(b) The Giving Tree \_\_\_\_\_

B.3 Who said to whom. [2\*1=2M]

(a) I'm too tired to climb.

\_\_\_\_\_

(b) Stop! You're tickling me."

\_\_\_\_\_

B.4. What secrets did Hiawatha learn from the birds? [2M]

---

---

B.5. How was the stump of the tree useful? [2M]

---

---

B5. Who came to Akbar's court? What did he claim to know? [2M]

---

---

**WRITING SECTION [10M]**

C.1. Look at the picture and write a paragraph in 75-100 words. You may use the words given [ library, shelves, discussing, making notes ] [5M]



---

---

---

---

---

---

---

---

---

---

C.2. Rearrange the following sentences in the correct order. Also, choose the right word from the box and add it before each sentence. [4M]

First	Then	After that	Finally
-------	------	------------	---------

1. It gave him its branches to make a house.
2. It asked him to sit on the stump.
3. It gave him its trunk to make a boat.
4. The tree gave its apples to the boy.

---

---

---

---

---

---

---

---

---

---

C.3. Make a sentence with [1M]

naughty \_\_\_\_\_

## GRAMMAR SECTION [15M]

Do as directed.

[15\*1=15M]

D.1. Make opposites using *dis / in / un*

(a) able \_\_\_\_\_ (b) capable \_\_\_\_\_

D.2. Make naming words using *ness / ity / ty*

(a) kind \_\_\_\_\_ (b) stupid \_\_\_\_\_

D.3. Morning exercise makes you \_\_\_\_\_.

[ Use any **describing word** in the blank]

D.4. Throw the ball \_\_\_\_\_

[Use the correct form of **slow**]

D.5. There is \_\_\_\_\_ old house with \_\_\_\_\_ huge yard behind it.

[Use **a / an / the** in the correct place]

D.6. Write the full form of

(a) shan't \_\_\_\_\_ (b) weren't \_\_\_\_\_

D.7. Choose the correct word and fill in the blank ' **bough / bow** '

I made a small \_\_\_\_\_ from the \_\_\_\_\_ of this tree.

D.8. Circle the silent letter

(a) k n i t (b) d o u b t

D.9. Add ' **ing** ' to the following words to make new words.

(a) write \_\_\_\_\_ (b) play \_\_\_\_\_

D.10. Tick the word that ends with ' **id** ' sound.

created

licked

D.11. Choose the correct word from the bracket and fill in the blanks.

[ **his her it** ]

\_\_\_\_\_ (**my brother's**) hair is black in colour but \_\_\_\_\_ (**my sister's**)

hair is brown.

D.12. Write down the past tense of

*cut* \_\_\_\_\_ *build* \_\_\_\_\_

D.13. Join the two sentences using **wherever**

I go. I have friends.

---

D.14. Punctuate the following.

every sunday i go for a run.

---

D.15. Choose the correct word from the brackets and fill in the blanks.

‘The little hero’ is a \_\_\_\_\_ of a rabbit with no \_\_\_\_\_. [**tail , tale**]

### VOCABULARY SECTION [10M]

E.1. Make 2 new words from **‘INDEPENDENCE’** [2 \* ½ = 1M]

\_\_\_\_\_

E.2. Give one word for [3\*1 = 3M]

(a) a person from Japan \_\_\_\_\_

(b) a place where books are kept \_\_\_\_\_

(c) a person who maintains law and order \_\_\_\_\_

E.3. Give the synonym for [1M]

(a) queer \_\_\_\_\_

E.4. Write down the antonym for [1M]

(a) real x \_\_\_\_\_

E.5. Add **er / r** to the word to make new words. [1M]

stiff \_\_\_\_\_ use \_\_\_\_\_

E.6. Rearrange the words to make a meaningful sentence. [1M]

an / old / queer / carpenter / piece / of / wood / bought / a



---

E.7. Replace the word underlined with a word that **gives the same meaning** and rewrite the sentence. [1M]

You should **make up your mind** quickly.

---

E.7. What word sign have you seen at homes? [1M]

\_\_\_\_\_

**SPELLING SECTION [10M]**

F.1. Write the correct spelling of [2\*1=2M]

(a) squirrel \_\_\_\_\_

(b) mastery \_\_\_\_\_

F.2. Fill in the missing letters to make meaningful words. [2\*1=2M]

(a) d e \_ \_ i c \_ \_ o u s

(b) w \_ \_ i s \_ \_ e r

F.3. Circle the correct spelling. [2\*1=2M]

(a) scholar                  skolar                  scolar                  schlor

(b) Assames                  Assamese                  Assamis                  Assamse

F.4. Rearrange the jumbled letters to make meaningful words. [2\*1=2M]

(a) lorega \_\_\_\_\_ (Hint: in great numbers)

(b) jamines \_\_\_\_\_ (Hint: a kind of flower)

F.5. Which of the following words are mis-spelt. Rewrite the mis-spelt words in the space given below. [2\*1=2M]

lodge

secert

shade

ofen

\_\_\_\_\_

\_\_\_\_\_





---

---

---

---

---

---

---

---



परमाणु ऊर्जा शिक्षण संस्था  
Atomic Energy Education Society

वार्षिक परीक्षा- अभ्यास प्रश्नपत्र-II / Annual Examination Practice Paper-II

कक्षा/Class : IV

अवधि / Duration : 3 Hrs

विषय/Subject : ENGLISH

अधिकतम अंक/Maximum Marks : 80

**SECTION-A**

**Reading (20 Marks)**

**Seen Passage**

**I.A) Read the passage carefully and answer the following questions. (5 Marks)**

That night, Birbal went quietly to the pundit's room when he was asleep. He whispered into the pundit's ear and tickled him with a feather. The pundit, half awake, cried out suddenly and shouted out words in his mother tongue. Birbal came to the court the next day and told everyone that the pundit's mother tongue was Telugu.

**Q-1) Fill in the blanks.**

- a) Birbal tickled the Pundit with a ..... (1)  
a) pencil (b) scarf (c) feather (d) none
- b) Complete- (1)  
b) The Pundit's mother tongue was .....

**Q-2) What did the Pundit do when Birbal tickled him? (1)**

Ans.....

**Q-3) Who accepted the Pundit's challenge? (1)**

Ans.....

.....

**Q-4) Why did Birbal go to the Pundit's room? (1)**

Ans- .....

.....

**I.B) Read the passage carefully and answer the following questions. (5 Marks)**

Now, the carpenter decided to send Pinocchio to school. But there, Pinocchio did nothing but look for fun. He often ran away from school. “Why don’t you go to school?” asked the carpenter. Pinocchio told him a lie..... and his nose started growing longer and longer.

Q-1) Where did the carpenter send Pinocchio? (1)

Ans- .....  
.....

Q-2) What did Pinocchio learn at the school? (1)

Ans- .....  
.....

Q-3) What happened when Pinocchio told a lie? (1)

Ans- .....  
.....

Q-4) Write one word (1)

One who works with wood- .....

Q-5) Write the short form of- do not- ..... (1)

**Unseen passage**

**II. Read the following passage and answer the questions that follows.(10 Marks)**

Plants need sunlight and water to make their own food. You can do an experiment to test if this is true. Place a bucket over a patch of green grass. After a few days, lift the bucket. You will see that the grass is not as green anymore. If you leave the bucket in place for a week, the grass will become very dull. This happens because the grass cannot make food in the dark. Remove the bucket. In a few days, the grass will start turning green again.

A. Tick the correct answer. (2)

1- Plants need..... and water to make their own food.

- a) wood      b) sunlight      c) soil      (d) none

2- Usually a bucket is used to store .....

- a) curry      b) water      c) fruits      (d) none

B. Fill in the blanks with correct option. (2)

- a) The grass cannot make the food in the ..... (sunlight/ dark)
b) When we remove the bucket in a few days, the grass will turn ..... again. (yellow/green)

C. Write the present (I form) tense of the words given below. (2)

removed- ..... became- .....

D. Write the opposites of the word given below. (2)

dark- ..... start- .....

E. Pick out two describing words from the passage. (2)

.....

**SECTION-B TEXTUAL QUESTIONS (10 MARKS)**

**POETRY (5Marks)**

I) Answer each question in a complete sentence.

1- Where did the naughty boy go? (1)

Ans-

.....
.....

2- When should we not water the plants? (1)

Ans- .....

.....

3- Name any four flowers you like. (2)

Ans- .....

.....  
4- What did Hiawatha learn about the birds? (1)

Ans- .....  
.....

**PROSE(5Marks)**

II) Answer each question in a complete sentence.

a) How did the tree help the boy earn money? (1)

Ans- .....  
.....

b) Where did the children go to buy books? (2)

Ans- .....  
.....

c) Who said to whom? (2)

‘My teeth are too weak for apples.’

Ans- ..... said to .....

**SECTION-C: CREATIVE WRITING (10 MARKS)**

**GENERAL**

I. Describe the given picture in a paragraph of 5-6 sentences using the clues given below. (5)

Playing, swing, children, happy, park, sand castle, skipping





---

---

---

---

---

---

---

---

**BASED ON LESSONS**

II. Write in 5-6 sentences about the importance of trees and why should we not cut them. You can use the words given below. (5)

air, fruits, rain, flowers, shade, nature, shelter to animals

---

---

---

---

---

---

---

---

---

**SECTION-D: GRAMMAR (15 MARKS)**

I) Do as directed.

1. Fill in the blanks choosing the suitable option. (3)
  - i) Throw the ball .....
  - a) slow    b) slower    c) slowly
  - ii) She wanted ..... umbrella.
  - a) a    b) an    c) the
  - iii) The monkey has a long .....
  - a) tell    b) tail    c) tale
  
2. Add dis/in to make the opposite of the words. (2)
  - i) own- .....    ii) secure- .....
  
3. Underline the describing words in the following sentences. (2)
  - i) He bought a thin book.
  - ii) They went to a small shop.
  
4. Circle the silent letter. (2)

knife                      doubt
  
5. Punctuate the sentence and rewrite it. (2)
  - i) where do you live  
Ans- .....
  - ii) on saturday ram will not come to school

Ans- .....

2- Make another word and complete the sentences. (2)

eg- Their house is very big. (there)

i) He is their only ..... (sun)

ii) Don't jump on the ..... (flour)

3- Complete the sentence by adding – ing to the given word in the brackets. (2)

i) Her mother was ..... (cook)

ii) The maids were ..... the rooms. (mop)

**SECTION -E VOCABULARY ( 10 MARKS)**

1. Give one word or another word for.. (2)

i) A place where aeroplanes take off and land -.....

ii) A person who treats patients- .....

2. Write two spellings with ee (2)

eg- tree

.....

3. Write / Make two new words from 'Grandfather' (2)

.....

4. Choose the correct answer. (2)

i) The word 'queer' means - .....

a) special                                      b) strange

ii) We see many books in a .....

a) school                                        b) library

5- Write Rhyming words for- (2)

- i) heat- ..... ii) book- .....

**SECTION -F SPELLING (10 MARKS)**

Do as directed.

- 1) Circle the correct spelling. (3)
- i) tongue                      tongeutoung
  - ii) rekognize              recognise              recogniise
  - iii) tommorrowtomorrow              tomorrow
- 2) Unjumble the letters and make a meaningful word. (3)
- i) othbrer-.....
  - ii) uhtnagy- .....
  - iii) iercotur- .....
- 3) Fill in the missing letters to complete the words. (3)
- i) lang\_ \_ ge
  - ii) narra\_ \_ r
  - iii) shel\_ \_ s
- 4) Write another word for 'thirsty feet' (1)
- R\_ \_ \_ \_

**SECTION G-HANDWRITING (5 MARKS)**

**I. Write the paragraph given below in neat cursive handwriting.**

Books play a significant role in our lives. They say that, "When you open a book, you open a new world." I believe that everyone would agree with this statement as books have become treasure of knowledge to mankind. A book is like a best friend who will never walk away from you. For many people, books are part of their everyday life.

---

---

---

---

---

---

---

---

---

---



Atomic Energy Education Society

वार्षिक परीक्षा- अभ्यास प्रश्नपत्र-III/ Annual Examination Practice Paper-III

Class: IV

Time: 3 hours

Subject: English

Marks: 80

---

SECTION A

READING – 20 MARKS

I.A) Read the poem carefully and answer the questions given below.

“Come in, come in!”

Said the library door;

I opened it wide

And saw books galore

Tall skinny books

Up high on the shelves;

Little fat books

That stood by themselves.

I opened up one

And sat down to look;

The pictures told stories!

What a wonderful book!

1. What did the library door say? (1)

---

---

2. What type of books stood by themselves? (1)

---

---

3. The plural of “shelf” is \_\_\_\_\_ . (1)

i) Shelfs

ii) shelves

iii) shelfes

4. The same meaning word for “galore” is \_\_\_\_\_ . (1)

- i) in few numbers                      ii) in large numbers

5. The opposite of “low” is \_\_\_\_\_ . (1)

- i) narrow                      ii) short                      iii) high

**I.B) Read the passage carefully and answer the questions given below.**

Now, the carpenter decided to send Pinocchio to school. But there, Pinocchio did nothing but look for fun. He often ran away from school. “Why don’t you go to school?” asked the carpenter. Pinocchio told him a lie.... And his nose started growing longer. Each time he was rude to someone or told a lie, his nose grew longer. Finally, Pinocchio said, “I’m glad to be a real boy. I’ll never lie again.”

1. Complete the sentence. (1)

Each time he was rude to \_\_\_\_\_  
\_\_\_\_\_ grew longer.

2. What did Pinocchio do at school? (1)

\_\_\_\_\_

\_\_\_\_\_

3. The antonym of “polite” is \_\_\_\_\_ . (1)

- i) relax                      ii) rude                      iii) long

4. Write the short form of “ I shall ” is \_\_\_\_\_ . (1)

- i) I’ve                      ii) I’m                      iii) I’ll

5. The synonym of “ glad ” is \_\_\_\_\_ . (1)

- i) strange                      ii) annoyed                      iii) happy

**Unseen Passage**

**II. Read the following passage and answer the following questions.**

There was a large flock of sheep grazing in a field. A wolf secretly stole a lamb. The lamb tried hard to get away but it could not. As the wolf was about to kill the lamb, he thought of an idea to save himself.

The lamb pleaded, “Oh wolf! I know that I am going to die now. Will you be kind enough to fulfil my last wish?”

The wolf asked, "What is your last wish?" The lamb replied, "I am fond of music. Before I die, I wish to hear you play the flute." The wolf agreed and played the flute. "You play far better than my shepherd," said the lamb.

The wolf became very happy and started playing the flute very loudly. The shepherd and the dogs who were searching for the lamb came running and caught hold of the wolf.

**1. Complete the sentence. (1)**

The lamb pleaded, "Oh wolf! \_\_\_\_\_  
\_\_\_\_\_ my last wish.

**2. Who stole the lamb? (1)**

\_\_\_\_\_

**3. Who were searching for the lamb? (1)**

\_\_\_\_\_

**4. Name the musical instrument mentioned in the story. (1)**

**5. Write the "Past Tense" of Reply - (1)**

**6. The antonym of "soft" is (1)**

**7. Answer in "One" word. (2)**

i) A group of sheep is called a \_\_\_\_\_.

ii) The young one of a sheep is a \_\_\_\_\_.

**8. Choose the correct answer. (2)**

i) A person who looks after the sheep is called a \_\_\_\_\_.

a) hunter

b) shepherd

c) milkman

ii) The lamb was fond of \_\_\_\_\_.

a) Dancing

b) drawing

c) music

## SECTION – B

### TEXTUAL QUESTIONS - 10 MARKS

**Answer each question in a complete sentence.**

1. Who was Hiawatha? (1)

\_\_\_\_\_

2. Why did the boy in the poem "The Naughty Boy" go to Scotland? (2)



---

---

3. Why did the child in the poem “Books” like looking at the pictures? (2)

---

4. Who came to Akbar’s court one day? (1)

---

5. Name the things that the tree gave to the boy? (2)

---

6. Write the other names of the following. (2)

Birch bark - \_\_\_\_\_ Palm leaves - \_\_\_\_\_

### SECTION – C

#### CREATIVE WRITING - 10 MARKS

**I. Describe the given picture in a paragraph of 5-6 sentences using the clues given in the help box. (5)**

Huts	dogs	handpump	take bath	pouring	pot	
Children	play	tyre	trees	women	study	child



---

---

---

---

---

---

---

---

---

---

**II. Write 5 – 6 sentences about the naughtiest child in your class. Use the clues given in the**

**help  
box.**

mischiefs	teases	play	run	tell lies
shout	snatches	laughs	silly questions	always moving
incomplete				

---

---

---

---

---

---

---

---

---

---

---

---

---

---

---

---

---

---

---

---

---

---

---

---

---

---

**SECTION – D**  
**GRAMMAR - 15 MARKS**

**I) Do as directed.**

**1. Write plurals. (1)**

- i) apple - \_\_\_\_\_ ii) branch - \_\_\_\_\_

**2. Add 'ing' to form a new word. (2)**

- i) cook - \_\_\_\_\_ ii) solve - \_\_\_\_\_

**3. Choose the correct answer and fill in the blank. (2)**

- i) The squirrel has a long \_\_\_\_\_. ( tale / tail )  
ii) I can \_\_\_\_\_ the bird's song. ( hear / here )

4. Complete the sentence by choosing the right word. (1)

i) \_\_\_\_\_ I am sad, I cry.

i) Whoever

ii) Whenever

iii) Wherever

5. Tick ( ) the word which ends with the 'id' sound. (1)

failed

accepted

licked

6. Fill in the blank with a or an . (1)

I play in the park for \_\_\_\_\_ hour every day.

7. Circle the silent letter. (2)

i) k n i f e

ii) w r i t e

8. Complete the sentences with the correct word. (2)

i) My grandmother can speak English \_\_\_\_\_. (fluent)

ii) I patted the puppy \_\_\_\_\_. (gentle)

9. Punctuate the following sentence. (1)

what is the colour of the sky

---

10. Circle the "describing" word. (1)

There is a huge banyan tree near my school.

11. Change the words into "opposites" using "dis" or "in"

i) able - \_\_\_\_\_

ii) capable - \_\_\_\_\_

## SECTION – E

### VOCABULARY -10 MARKS

1. Give one or two words answer. (4)

i) A place where sick people are taken care of \_\_\_\_\_

ii) Word sign that we see at the toy shop \_\_\_\_\_

iii) The language spoken by the Goan people \_\_\_\_\_

iv) People of Scotland are called \_\_\_\_\_.

2. Write two words ending with "ail". (1)

For example: t a i l \_\_\_\_\_

**3. Write the names of the tools used by a carpenter. (1)**

i) \_\_\_\_\_ ii) \_\_\_\_\_

**4. Choose the correct answer. (2)**

i) The word “fourscore” means \_\_\_\_\_.

forty                                      eighty                                      twenty

ii) The same meaning word for “amazed” is \_\_\_\_\_.

scared                                      laughed                                      surprised

**5. Match the words in column A with words in column B. (2)**

A

B

i) King

passengers

ii) Teacher

clients

iii) Bus driver

courtiers

iv) Lawyer

students

## SECTION – F

### SPELLINGS - 10 MARKS

**Do as directed**

**1. Circle the correct spelling. (3)**

a) beevers                                      beavers                                      bivers

b) wrestler                                      wresler                                      vrestler

c) tomarrow                                      tomorraw                                      tomorrow

**2. Make meaningful words with the jumbled letters. (2)**

a) u r b w o r - \_\_\_\_\_                                      b) i r s g n e - \_\_\_\_\_

**3. Fill in the missing letters and complete the words. (3)**

a) p u \_\_\_\_ e t                                      b) j \_\_\_\_ s m \_\_\_\_ n e

c) m a \_\_\_\_ h \_\_\_\_ n e s

4. Read the spellings and encircle the wrong ones. Rewrite the spellings after correcting them.

(2)

scholar

sicrets

truth

hebiscus

tamarind

grocer

\_\_\_\_\_

\_\_\_\_\_

**SECTION – G**

**HANDWRITING - 5 MARKS**

Trees are very important for our environment and human beings. They give us clean water to drink, air to breathe, shade. They give food to humans, animals and plants. They provide homes to many animals and birds, firewood for cooking, materials for buildings and furniture. They help to balance climate. They bring rain. They protect soil. Trees protect us from UV rays. They need extreme care and protection.

\_\_\_\_\_

\_\_\_\_\_

\_\_\_\_\_

\_\_\_\_\_

\_\_\_\_\_

\_\_\_\_\_

\_\_\_\_\_

\_\_\_\_\_

\_\_\_\_\_

\_\_\_\_\_

\_\_\_\_\_

\_\_\_\_\_

\_\_\_\_\_

\_\_\_\_\_

\_\_\_\_\_

\_\_\_\_\_

\_\_\_\_\_

\_\_\_\_\_

\_\_\_\_\_

\_\_\_\_\_

\_\_\_\_\_

\_\_\_\_\_

\_\_\_\_\_

\_\_\_\_\_

Handwriting practice page with multiple rows of horizontal lines for writing.

---

---

---

---

---

---

---

---

---

---



परमाणु ऊर्जा शिक्षण संस्था  
Atomic Energy Education Society

वार्षिक परीक्षा- अभ्यास प्रश्नपत्र-1 / Annual Examination Practice Paper-I

कक्षा/Class :IV

अवधि/Time: 3 hours

विषय/Subject :EVS

अधिकतम अंक/Maximum . Marks : 80

**Section A : Observation and Reporting ( 30 marks)**

Q1. Observe the given pictures and fill in the blanks.

( 5 X 1 =5marks )

a. An eagle's beak is used to \_\_\_\_\_ and eat  
meat. ( **cook**      **tear**      **crush** )



b) Pilloo aunty paid the money for seven kulfis. This  
shows her \_\_\_\_\_

( **honesty**      **friendliness**      **enmity** )



c) I am small and round like a pearl. I have a sharp and  
spicy taste. I am a \_\_\_\_\_

( **cardamom**      **salt**      **black pepper** ) .



d) \_\_\_\_\_ is a root vegetable.

( **cucumber**      **cabbage**      **radish** )





e) A \_\_\_\_\_ front teeth keep growing throughout their life. ( **snake**   **rabbit**   **squirrel** )



**Q2. Observe the picture and fill in the blanks.**

**(5 x1=5 marks)**



a) Muktapur village is famous for \_\_\_\_\_ sarees.

( **chanderi**   **Pochampalli**   **banarasi** )

b) Threads are \_\_\_\_\_ to give bright colours to the cloth.

( **dyed**   **cut**   **washed** )

c) Thread bundles are put into \_\_\_\_\_ to weave the cloth.

( **table**   **loom**   **machine** )

d) The size and the number of \_\_\_\_\_ change according to the design.


( **pearls**   **needles**   **laces** )

e) \_\_\_\_\_ weave the beautiful Pochampalli Sarees.


( **weavers**   **tailors**   **plumber** )

**Q3. Identify and name the following.**

**(4 x 1=4marks)**



a) \_\_\_\_\_



b) \_\_\_\_\_



d) \_\_\_\_\_



e) \_\_\_\_\_

**Q4. Answer the following questions.**

**( 3x2 =6marks )**



**A,**

**a) What is a langar?**

\_\_\_\_\_

**b) What is served after Ardas?**

\_\_\_\_\_



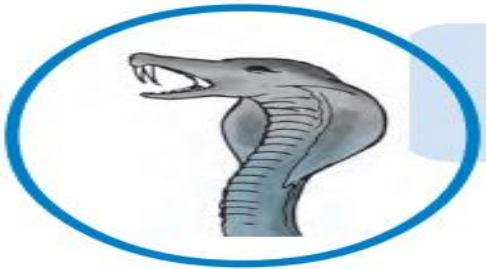
**B)**

**i) Why Chhotu is sprinkling water on the vegetables?**

---

**ii) From where does Babuji buy vegetables?**

---



**C)**

**i) What type of teeth do snakes have?**

---

**ii) How do the snakes eat their food?**

---

**Q5. Give the examples of any two.**

**(5 X 1 =5marks )**

a) Vegetables that spoils quickly.

\_\_\_\_\_

\_\_\_\_\_

b) Plants having weak stem.

\_\_\_\_\_

\_\_\_\_\_

c) Trees most commonly grown in Kerala

\_\_\_\_\_

\_\_\_\_\_

d) Occupations in Navy.

\_\_\_\_\_

\_\_\_\_\_

e) Spices used in making garam masala.

\_\_\_\_\_

\_\_\_\_\_

**Q6. Look at the picture and arrange the stages of seedlings come out of the seeds.**

**(5 x 1=5marks )**



a) After 10- 12 days the seedlings will come out of the seeds.

b) Take the wet wad of cotton wool and place it on the mouth of a glass.

c) Tie the cotton wool to the mouth of the glass with a thread.

d) Soak the seeds overnight in a bowl full of water.

e) Put the overnight soaked seeds on the mouth of the tumbler.

**Identification and Classification. (25)**

**Q7. Identify- Who am I ?**

( 2 x 1=2 marks)

a) I make my nest in a hole in a tree trunk,

I like to make ‘Tuk, Tuk’ sound in the summer.

---

c) I am a small and skinny chap.

Added to hot oil and ghee,I spread my fragrance .

When I am roasted , curd and jaljeera are favourite to me.

---

**Q8. Classify the following in the correct column.**

( 4 x 1=4marks)

**CARROT**

**BEETROOT**

**CUCUMBER**

**BRINJAL**

ROOTS	FRUITS

**Q9. Write two differences between boarding school and other schools.( 4 x1 =4)**

Boarding school	Other schools

**Q10. Circle the one which does not belong to the group. ( 4 x1 =4marks)**

- a) Feet                      claws                      wings                      nest
- b) Turmeric                      cloves                      tomato                      cardamom
- c) Bihu                      guruparab                      Kerala                      Holi
- d) Hindi                      Dollar                      Rupee                      Dirham

**Q11. Write Five sentences on Wahida Prism. ( 5x 1 =5marks)**

---

---

---

---

---

---

**Q12. Answer the following. ( 3x 2 =6marks )**

a) What is a ' Mid day Meal' ?

---

---

b) Write about any two ways in which a bird uses its beak?

---

---

c) Write the uses of the following implements used in farming.

i) illige - \_\_\_\_\_

\_\_\_\_\_

ii) Khunti - \_\_\_\_\_

\_\_\_\_\_

**Discovery of Facts ( 25 marks)**

**Q13. Name the following.**

**(4 x1 =4 marks)**

a) Language of Abu- Dhabi. \_\_\_\_\_

b) A spice used to cure tooth ache. \_\_\_\_\_

c) In Ladakh , Meme-le means. \_\_\_\_\_

d) The mountains made of only sand are called. \_\_\_\_\_

**Q14 . Write a short note on the Kerala.**

**( 2 marks)**


\_\_\_\_\_

\_\_\_\_\_

\_\_\_\_\_


\_\_\_\_\_

**Q15. Match the following birds's feet with the different needs.(5x1=5marks)**




a)

1) To walk on the land



b)

2) To climb the tree.



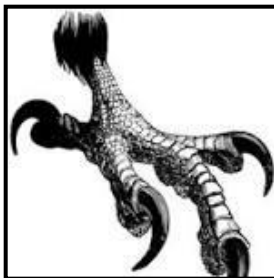
c)

3) To swim in water



d)

4) To catch the prey



e)

5) To hold the tree branch



**Q16. Give reasons.**

**(3 x 2 =6 marks)**

a) Chuskit couldn't go to school.

---

---

b) Petrol is cheaper than water in Abu Dhabi.

---

---

c) Many trees does not grow in desert areas.

---

---

**Q17. Draw and name any implement used for farming.**

**(2 marks)**

**Q18. Draw any two different types of bird's beak.**

**(2 marks)**

**Q19. Locate the following states on the given map of India. (4 marks.)**

**a) Kerala**

**b) Maharashtra**

**c) Gujarat**

**d) Telangana**





परमाणु ऊर्जा शिक्षण संस्था  
Atomic Energy Education Society

वार्षिक परीक्षा- अभ्यास प्रश्नपत्र-II / Annual Examination Practice Paper-II

कक्षा/Class : IV

अवधि / Duration : 3 hours

विषय/Subject : EVS

अधिकतम अंक/Maximum Marks : 80

OBSERVATION AND REPORTING (30 MARKS)

I. Observe the picture and answer the following.

(1X5=5)

1. Name the state where this festival is celebrated.

\_\_\_\_\_



2. Name the country to which this currency belongs .

\_\_\_\_\_



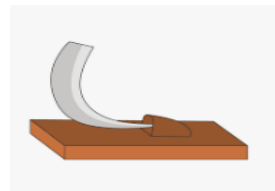
3. Name the spice .

\_\_\_\_\_



4. Name the implement .

\_\_\_\_\_



5. Name the person in the picture.

\_\_\_\_\_



II. Name the following.

(1X4=4)

1. A vegetable that grows under the ground.

\_\_\_\_\_

2. A vegetable that spoils quickly.

\_\_\_\_\_

3. A bird that lays its eggs in a crow's nest.

\_\_\_\_\_

4. A tree which has hanging branches.

\_\_\_\_\_

III. Give an example of each of the following. (1X6=6)

1. A spice which is put into both sweet and salty things.

\_\_\_\_\_

2. A vegetable that does not have seeds.

\_\_\_\_\_

3. A bird that stitches two leaves to make its nest.

\_\_\_\_\_

4. A plant which has a delicate stem.

\_\_\_\_\_

5. A fruit which spoils quickly.

\_\_\_\_\_

6.A spice which is used to make food hot and spicy.

\_\_\_\_\_

IV. Answer the following questions.

(2X2=4)

1.Why did Nandita feel like vomiting when at first she had to use the toilet where mama lived?

---

---

---

---

2.What did Raziya read in the newspaper?

---

---

---

---

V.Many steps are needed to grow crops. Look at the pictures and mark them in the correct order.

(3 MARKS)



VI. Answer \_\_\_\_\_ question \_\_\_\_\_ re. \_\_\_\_\_

1. Write three differences between Kerala and Abu Dhabi on the basis of their :



Currency \_\_\_\_\_

Language \_\_\_\_\_

Landform \_\_\_\_\_

VII. Answer the following questions. (1X5=5)

1. Why should onions be taken out at the right time?

---

---

2. Why do birds make nests?

---

---

3. What are the three things used to make 'Kadhah Prasad'?

---

---

4. Who all helped Chuskit reach school?

---

---

5. What are 'sand dunes'?

---

---

**IDENTIFICATION AND CLASSIFICATION (25 MARKS)**

**I. Who am I ?(1X2=2)**

1. A crown on my head and coins on my tail.

So many shades of blue from top to tail.

I am the national bird of India.

I am a \_\_\_\_\_

2. I look like a big iron cage.

I have a fan, a light and even a bell.

If you press the button,

I take you up and down a building.

I am a \_\_\_\_\_.

**II. Classify the following in the correct columns.**

**(1X4=4)**

puppy    table    moon    mosquito    kitten    book    fish    bag

Living Things	Non -Living Things

**III. Circle the one which does not belong to the group.**

**(1X4=4)**

1. army                  navy                  air force                  teacher

2.right turn      laugh                  left turn                  about turn

3.market                  apartment                  bungalow                  tent

4.crow                  lizard                  dove                  sparrow

IV. Answer the following questions. (2X5=10)

1. How ischeva rice prepared?

---

---

---

---

2. How did Wahida Prism become a doctor?

---

---

---

---

3. What differences did Nandita find between getting water from the public tap and in the village?

Water from the public tap	Water from the village
1.	1.
2.	2.



--	--

4. How did 'Pochampalli' cloth get its name?

---

---

---

---

5. Write any four different things for which birds use their feet and claws.

---

---

---

---

V. Write short notes on Desert Oak Tree.

(5 MARKS)

---

---

---

---

---

---

---

---

---

---

**DISCOVERY OF FACTS (25 MARKS)**

I. Name the following.

(1X3=3)

1. A job in which people wear a uniform.

---

2. A spice which is used to freshen our mouth.

---

3. A craft in danger.

---

II. Read the information given below and answer the following questions.

(1x3=3)

After ardaas, kadhahprasad was distributed in Gurudwara. Some of the boys quickly laid out durries in the verandah and all the people sat down in rows to have langar. Some people served food and others served water. Everyone ate together.

1. What was distributed after ardaas?

---

2. On what did people sit to have their food?

---

3. Where do Sikhs go to pray?

---

III. Give reasons.

(2X3=6)

1. Vani and Prasad's house is always filled with brightly coloured threads.

---

---

---

2. Wahida Prism was the first woman to lead a passing out parade.

---

---

---

---

3. All day, Chuskit used to sit near the window of her house and draw pictures.

---

---

---

---

IV. Match the following.

(1X4=4)

1. Belvanika village

a. Pochampalli town

2. Tannamandi village

b. Ladakh

3. Skitpo Pol village

c. Karnataka


4. Mukhtapur village

d. Jammu And Kashmir

V. Draw a plant and label the given parts of the plant.

(2 MARKS)


( bud flower stem leaf roots )



VI. Draw a bird and label the given parts of a bird.

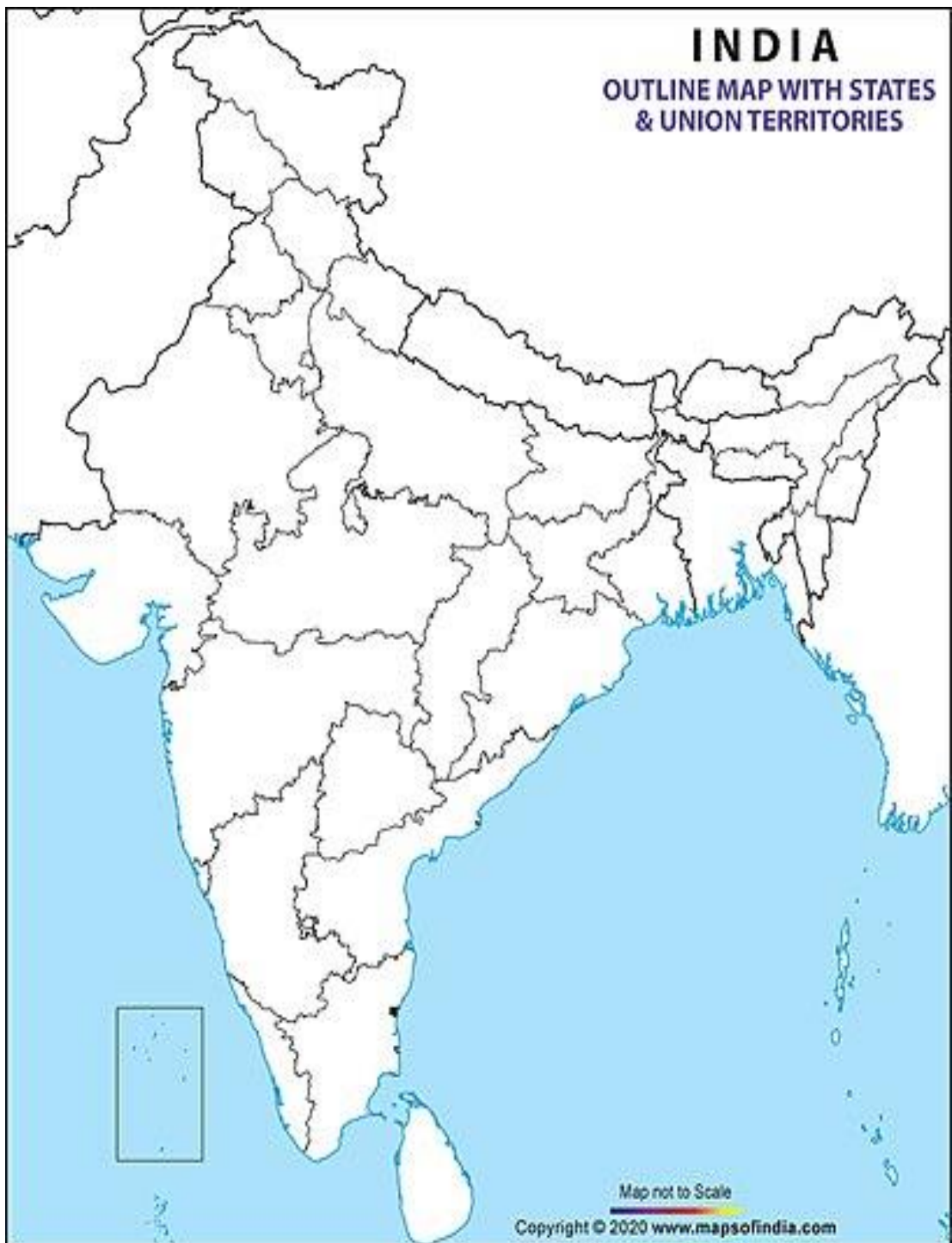
(2 MARKS)

( head neck tail beak claws )



VIII. On the outline map of India mark the following places . (1X3=3)

( Karnataka Maharashtra Kerala )





परमाणु ऊर्जा शिक्षण संस्था  
Atomic Energy Education Society

वार्षिक परीक्षा- अभ्यास प्रश्नपत्र-III/ Annual Examination Practice Paper-III

कक्षा/Class : IV

अवधि / Duration : 3 hours

विषय/Subject : EVS

अधिकतम अंक/Maximum Marks : 80

Q1.Observe the given pictures and fill in the blanks.

(1x5=5)

a. \_\_\_\_\_ lays its eggs in the fold of the leaf.

(tailor bird/ weaver bird)



b. This is the famous \_\_\_\_\_ dance of Assam.(Lohri/Bihu)



c. \_\_\_\_\_ can heal all wounds and makes our food yellow.

(black pepper/turmeric)



d. This is the only tree that has hanging roots. \_\_\_\_\_ (peepal/banyan)



e. \_\_\_\_\_ have sharp curved teeth. (cow/snakes)



Q2. Identify the picture.

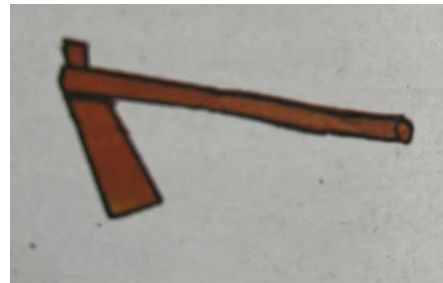
(1x4=4)



a. |

shutterstock.com - 268675401

\_\_\_\_\_



b.

\_\_\_\_\_



c.

\_\_\_\_\_



d.

\_\_\_\_\_

**Q3. Give example.**

**(1 x6=6)**

**a. Two climbers.**

\_\_\_\_\_

\_\_\_\_\_

**b. Two farming tools.**

\_\_\_\_\_

\_\_\_\_\_

**c. Two spices that grow in Kerala.**

\_\_\_\_\_

\_\_\_\_\_

**d. Two ways of purifying water.**

\_\_\_\_\_

\_\_\_\_\_

**e. Two water borne diseases.**

\_\_\_\_\_

\_\_\_\_\_

**f. Two birds that live in the holes of a tree.**

\_\_\_\_\_

\_\_\_\_\_



**Q4. Rearrange the steps of making Pochampalli saree and write down in correct order. (1x4=4)**

- a. Threads are dyed with bright colours.
- b. Bundles are put on the looms and clothes are woven.
- c. Threads are put in boiling water.
- d. Threads are dried and rolled into bundles.

- 1. \_\_\_\_\_
- 2. \_\_\_\_\_
- 3. \_\_\_\_\_
- 4. \_\_\_\_\_

**Q5. Answer the following. (2x2=4)**

**a. Write any two works of a naval doctor on the ship.**

---

---

---

---

**b. How did Bhima Sangh solve the village problems?**

---

---

---

---

**Q6. Answer the questions based on the picture given below. (2x1=2)**



**a. Which place did Wahida belong to?**

---



**b. Who used the wheel chair?**

---

**Q7. Write true or false.**

**(1x5=5)**

**a. Babuji brings fresh vegetables from mall. \_\_\_\_\_**

**b. Pigeon lives in old and deserted buildings. \_\_\_\_\_**

**c. Babloo's house was on sixth floor. \_\_\_\_\_**

**d. Carrot is an underground root. \_\_\_\_\_**

**e. Dhondu wants to buy a welding machine. \_\_\_\_\_**

**Identification and Classification**

**(25 Marks)**

**Q8. Who am I?**

**(1x 2 =2)**

**a. I can be powdered fine**

**To make food hot and spicy .**

**Ans \_\_\_\_\_**

**b. Eat me always after your meal**

**I refresh your mouth, you surely feel.**

**Ans. \_\_\_\_\_**

**Q9. Classify the following in the correct column.**

**(1x 4=4)**

**Ginger**

**pineapple**

**Tomato**

**banana**

<b>Fruits and vegetables which are smooth .</b>	<b>Fruits and vegetables which are rough.</b>

**Q10. Circle the one which does not belong to the group.**

**(1x4=4)**

**a. pigeon**

**crow**

**peacock**

**lotus**

**b. radish**

**beetroot**

**money plant**

**carrot**

**c. cumin seed**

**apple**

**fennel seed**

**turmeric**

d. langar                  kadhah prasad    tomato                  ardaas

**Q11. Write the steps to make spicy potato chaat. (1x4=4)**

1. \_\_\_\_\_
2. \_\_\_\_\_
3. \_\_\_\_\_
4. \_\_\_\_\_

**Q12. Answer the following questions. (2x2=4)**

**a. Why was Raziya worried when she read the newspaper ?**

---

---

---

**b. Why was Akshay confused?**

---

---

---

**Q13. Write any two differences between Mama's house and Babloo's house.**

Mama's house	Babloo's house

**Q14. Write a short note on Wahida prism. (5)**

---

---

---

---

---

**Discovery of facts.**

**(25 Marks)**

**Q15. Name the following.**


**(1x 3 = 3)**

**a. A prayer that Sikh people do in Gurudwara. \_\_\_\_\_**

**b. A machine with many needles. \_\_\_\_\_**

**c. Meaning of Aama- Le. \_\_\_\_\_**

**Q16. Look at the picture and answer the questions . (1x2=2)**



a. Which solution is prepared from above picture.

---

b. When it is given to the patients?

---

Q17. Match the column.

(1x 4= 4)

a. Cuffe Parade

Kerala

b. A spice garden of India

Globe

c. Cooking and eating together

langar

d. A model of earth.

Mumbai

Q18. Give reasons.

(2x 3=6)

a. It is difficult to pull out a small grass.

---

---

b. Petrol is cheaper than water in Abu Dhabi.

---

---

Q19. Write a short note on Abu Dhabi.

( 1 x2=2)

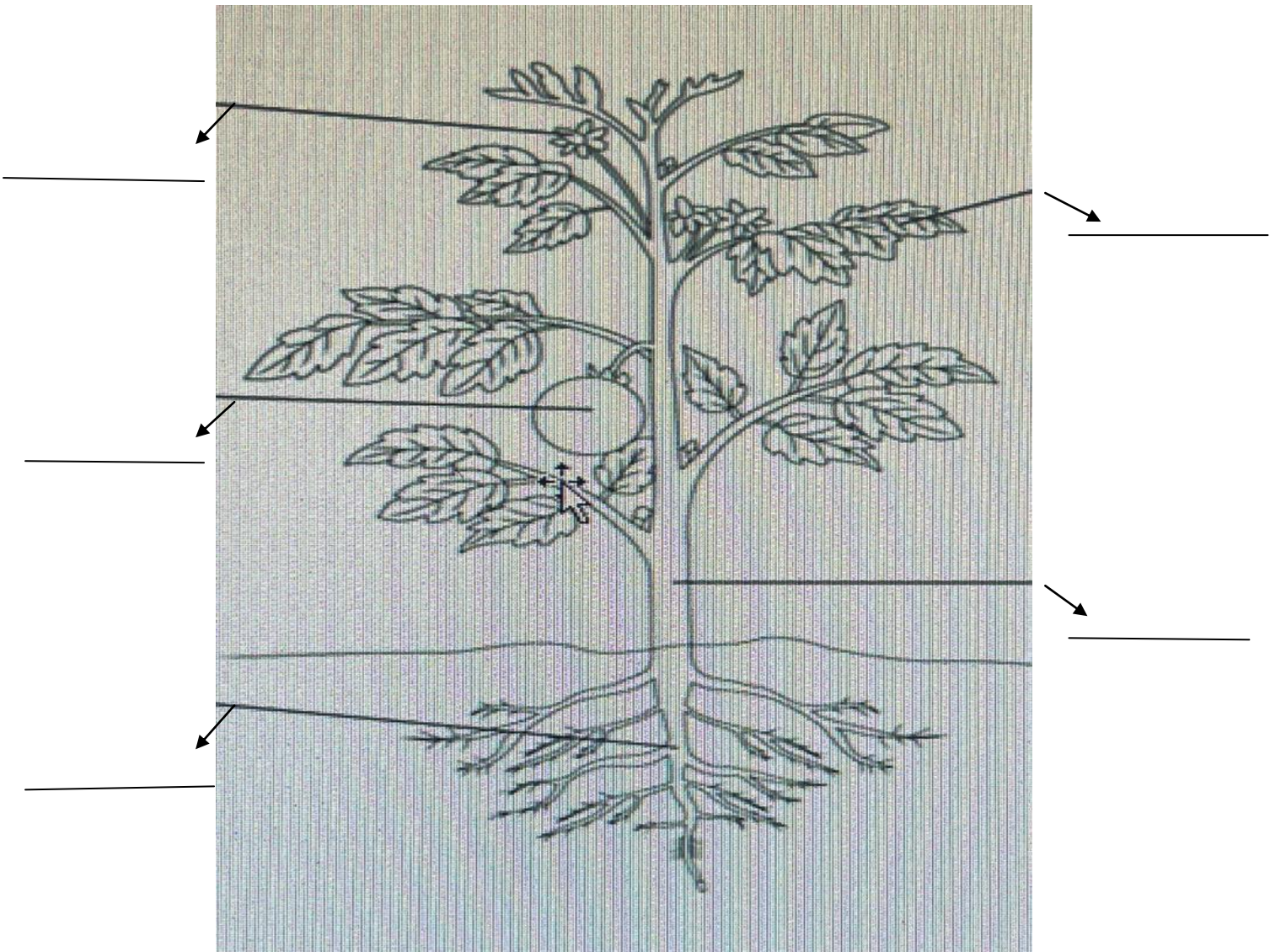
---

---

---

Q20. Look at the picture and label its parts.

(5)





**Q21. Locate the following states on the given map. (1 x 3=3)**

- a. Gujarat      b. Karnataka      c. Maharashtra**



## परमाणु ऊर्जा शिक्षण संस्था

### Atomic Energy Education Society

वार्षिक परीक्षा- अभ्यास प्रश्नपत्र-I / Annual Examination Practice Paper-I

कक्षा / Class : चौथी (4)

अवधि / Duration: 3 घंटे

विषय / Subject : हिंदी

अधिकतम अंक / Maximum Marks: 80

---

( पठन पर आधारित प्रश्न - 20 अंक )

प्र. 1 - नीचे दिए गए पठित गद्यांश को पढ़कर पूछे गए प्रश्नों के उत्तर लिखिए ।

एक दिन भीखू भाई का मन नारियल खाने का हुआ। ताज़ा-मुलायम, कसा हुआ, शक्कर के साथ। म्म्मम्म ! उसके बारे में सोचते ही भीखूभाई ने अपने होठों को चटकारा, "वाह क्या मीठा - मीठा सा स्वाद होगा!

लेकिन एक छोटी-सी समस्या थी। घर में तो एक भी नारियल नहीं था।

"ओहो ! अब मुझे बाज़ार जाना पड़ेगा," उन्होंने अपनी पत्नी लाभुबेन

से कहा। लाभुबेन अपने कंधे उचकाकर बोलीं, "खाना है तो जाना है। "

एक समस्या और थी। भीखूभाई ने कहा, "पैसे खर्च करने पड़ेंगे,

लाभुबेन बोली, "हाँ। पैसे तो खर्च करने पड़ेंगे।"

अब तक तो तुम्हें पता लग गया होगा कि भीखू भाई ज़रा कंजूस थे।

वे सीधे खेत में बूढ़े बरगद के नीचे जा कर बैठ गए और सोचने लगे, "क्या करूँ ?

में क्या करूँ ?"

1) भीखू भाई का क्या खाने का मन हुआ ? (1)

---

---

2) भीखू भाई कहाँ जा कर बैठ गए ? (1)

---

---

3) विलोम शब्द लिखो | (1)

मीठा - -----

4) लिंग बदलो | (1)

पत्नी - -----

5) खाली स्थान भरो | (1)

घर में तो एक भी ----- नहीं था।

**प्र. 2 - नीचे दिए गए पठित गद्यांश को पढ़कर पूछे गए प्रश्नों के उत्तर लिखिए ।**

हुदहुद एक बहुत ही सुंदर पक्षी है। इसके शरीर का सबसे सुंदर भाग इसके सिर की कलगी होती है। वैसे तो यह इसे समेटे रहता है। पर जैसे ही किसी तरह की आवाज़ होती है, यह चौकन्ना होकर परों को फैला लेता है। तब यह कलगी देखने में हू-ब-हू किसी सुंदर पंखी जैसी लगने लगती है।

हुदहुद का सारा शरीर रंग-बिरंगा और चटकीला होता है। पंख काले-काले होते हैं जिन पर मोटी सफ़ेद धारियाँ बनी होती हैं। गर्दन का अगला हिस्सा बादामी रंग का होता है। चोटी भी बादामी रंग की होती है, मगर उसके सिरे काले और सफ़ेद

होते हैं। दुम का भीतरी हिस्सा सफ़ेद और बाहरी हिस्सा काले रंग का होता है। चोंच पतली, लंबी तथा तीखी होती है। इस चोंच से यह आसानी से ज़मीन के भीतर छिपे हुए कीड़े - मकोड़ों को ढूँढ़ निकालता है।

1) हुदहुद कैसा पक्षी है? (1)

---

---

2) हुदहुद की कलगी देखने में कैसी लगती है। (1)

---

---

3) समान अर्थ लिखो | (1)

पंख - -----

4) विलोम शब्द लिखो | (1)

ज़मीन - -----

5) खाली स्थान भरो | (1)

हृदय का सारा शरीर ----- और

----- होता है।

**प्र. 3 - नीचे दिए गए अपठित गद्यांश को पढ़कर नीचे लिखे प्रश्नों के उत्तर लिखो ।**

गाँव में लता के दादाजी का एक छोटा - सा बगीचा है । बगीचे में तरह - तरह के पेड़ -पौधे हैं । दादाजी पेड़ पौधों का पूरा ध्यान रखते हैं । वे रोज़ पौधों में पानी देते हैं । समय - समय पर उनमें खाद देते हैं । उनके पौधों पर रंग -बिरंगे फूल खिले हैं। दादाजी ने सब्जियाँ भी उगाई है । उन्होंने गाजर, मूली, टमाटर, पालक, गोभी, धनिया आदि अनेक सब्जियाँ उगाई है । दादाजी कहते हैं कि ताज़ा सब्जियाँ खाना सेहत के लिए अच्छा है । पेड़ - पौधे हमारे मित्र है ।

1) बगीचा किसका है ? (1)

-----

2) बगीचे में क्या - क्या हैं ? (1)

-----

3) पेड़ पौधों का ध्यान कौन रखते हैं ? (1)

-----

4) बगीचे में कौन - कौन सी सब्जियाँ उगाई गई हैं ? (1)

-----

5) पेड़ - पौधे हमारे क्या हैं ? (1)

-----

6) अनुच्छेद के लिए उचित शीर्षक दीजिए । (1)

-----

7) अनुच्छेद से ढूँढकर शब्दों का अर्थ लिखो । (1)

वक्त - ----- उपवन - -----

8) अनुच्छेद से इनके बहुवचन ढूँढकर लिखो । (1)

सब्जी - ----- पौधा - -----

9) अनुच्छेद से ढूँढकर दो नाम वाले शब्द लिखो । (1)

-----

-----  
10) अनुच्छेद से ढूँढकर दो विशेषण शब्द लिखो । (1)

-----  
-----

(पाठ्य पुस्तक आधारित प्रश्न - 10 अंक )

प्र. 4 - नीचे लिखे प्रश्नों के उत्तर लिखो ।

(1) पढ़कू का नाम पढ़कू क्यों पड़ा होगा ? (1)

उत्तर - -----  
-----

(2) कबाड़ी क्या - क्या सामान खरीदते हैं ? (1)

उत्तर - -----  
-----

(3) धनी यात्रा के लिए उत्सुक क्यों था ? (2)



उत्तर - -----

-----

(4) चुन्नू ने दाल को पहले खट्टा फिर मीठा क्यों बताया ? (2)

उत्तर - -----

-----

(5) सुनीता को सब लोग गौर से क्यों देख रहे थे ? (2)

उत्तर - -----

-----

(6) हर जगह नारियल के दाम में फर्क क्यों था ? (2)

उत्तर - -----

-----

( रचनात्मक लेखन पर आधारित प्रश्न -10 अंक )

प्र. 5 (क) गांधी जी के बारे में पाँच वाक्य लिखो। (5)

---

---

---

---

---

---

---

---

---

---

(ख) दिए गए चित्र के बारे में पाँच वाक्य लिखो।

(5)



---

---

---

---

---

---

---

---

( व्याकरण पर आधारित प्रश्न - 15 अंक )

प्र. 6 (i) ये लोग क्या गढ़ते हैं ? (2)

सुनार- ----- लुहार- -----

(ii) शब्दों के अर्थ लिखो। (2)

मथनी - ----- मट्ठा - -----

(iii) नीचे लिखी चीज़ों की विशेषता बताने वाले शब्द लिखो । (2)

----- पेड़                      ----- पत्थर

(iv) एक - एक चीज़ का नाम बताओ जिसे - (2)

कुतरा जा सकता है - -----

काटा जा सकता है - -----

(v) इनमें कौन-कौन से ईंधन का इस्तेमाल किया जाता है ? (2)

मिट्टी के चूल्हे में - -----

स्टोव - -----

(vi) लिंग बदलो । (2)

मटका - ----- दर्जी - -----

vii) ऐसे रंगों के नाम लिखो जो किसी चीज़ के नाम पर पड़े हैं । (2)

उदाहरण : आसमान - आसमानी

-----

-----

(viii) दिए गए मुहावरे का वाक्य में प्रयोग करो । (1)

क) दिन रात एक करना

-----  
-----

**(शब्द भंडार पर आधारित प्रश्न - 10 अंक )**

प्र. 7 (i) विलोम शब्द लिखो । (2)

सवाल \_\_\_\_\_ कंजूस \_\_\_\_\_

(ii) समान तुक वाले शब्द लिखो । (2)

पन्ने - ----- सोने - -----

(iii) एक - एक चीज का नाम बताओ जिन्हें- (3)

बिलोते - -----

घोलते हैं- -----

फैंटते हैं- -----

(iv) उदाहरण को पढ़कर नीचे दी गई तालिका को आगे बढ़ाओ । (2)

उदाहरण : लाल - रंग

आलू - -----

भारत - -----

(v) नीचे लिखे वाक्यांशों के लिए एक - एक शब्द लिखो । (2)

जो बहुत पढ़ता है - -----

जो बहुत अच्छा खेलता है - -----

**(वर्तनी पर आधारित प्रश्न - 10 अंक )**

**प्र. 8** (i) वाक्य शुद्ध (सही) करके लिखो । (2)

क) स्कूल का बस आ रहा है ।

-----

ख) मेरे को बाज़ार जाना है ।

-----

(ii) दिए गए शब्दों के छूटे हुए अक्षर लिखकर शब्दों को पूरा करो। (3)

(क) बि ---- ली (ख ) आ श्र ---- (ग) क ----- डी

(iii) अक्षरों को सही क्रम में लिखकर शब्द बनाओ । (2)

(क) का र त री - -----

(ख) ख र बा अ - -----

(iv) शुद्ध शब्दों पर गोला लगाओ । (3)

नरियल नारियल नारीयल

बिल्कुल बिलकुल बिल्कूल

आभिनय अभीनय अभिनय

( सुलेख- 5 अंक)

**प्र. 9 नीचे लिखे अनुच्छेद को सुंदर लेख में लिखिए ।**

स्वस्थ शरीर में ही स्वस्थ मन निवास करता है। निरोगी काया सबसे बड़ा सुख है । संसार में किसी भी अच्छे कार्य को यदि करना है तो स्वास्थ्य का ठीक होना आवश्यक है । इसलिए कहा गया है, "एक तंदुरुस्ती हजार नियामत"। हमें शरीर को स्वस्थ रखने के लिए नियमितरूप से योग करना चाहिए । योग शरीर को सुंदर , सुगठित और सुदृढ़ बनाता है ।

---

---

---

---

---

---

---

---

---

---



(मुद्रित पृष्ठों की संख्या -12)

परमाणु ऊर्जा शिक्षण संस्था

अणुशक्तिनगर, मुम्बई- 400094

वार्षिक परीक्षा- अभ्यास प्रश्नपत्र-II / Annual Examination Practice Paper-II

कक्षा: चौथी

समय: 3 घंटे

विषय: हिन्दी

पूर्णांक: 80

(पठन क्षमता पर आधारित प्रश्न-20 अंक)

प्रश्न (1) पठित गद्यांश को पढ़कर प्रश्नों के उत्तर लिखो । (5)

हुदहुद एक बहुत ही सुंदर पक्षी है । इसके शरीर का सबसे सुंदर भाग इसके सिर की कलगी होती है । वैसे तो यह इसे समेटे रहता है । पर जैसे ही किसी तरह की आवाज़ होती है, यह चौकन्ना होकर परों को फैला लेता है । तब यह कलगी देखने में हू-ब-हू किसी सुंदर पंखी जैसी लगने लगती है। हुदहुद का सारा शरीर रंग-बिरंगा और चटकीला होता है । हुदहुद हमारे देश के सभी भागों में पाए जाते हैं ।

(क) हुदहुद के शरीर का सबसे सुन्दर भाग क्या होता है? (1)

उत्तर- .....

(ख) चौकन्ना होने पर हुदहुद क्या करता है? (1)

उत्तर-.....

(ग) हुदहुद का शरीर कैसा होता है ? (1)

उत्तर-.....

(घ) क्या हृदहृद हमारे देश में पाए जाते हैं ? (1)

उत्तर-.....

(ङ) निम्नलिखित शब्दों के विलोम शब्द लिखिए। (1)

अ) सुंदर - .....

ब) समेटना - .....

**प्रश्न (2) पठित गद्यांश को पढ़कर प्रश्नों के उत्तर लिखो । (5)**

सुनीता सात बजे सोकर उठी। कुछ देर तो वह अपने बिस्तर पर ही बैठी रही। वह सोच रही थी कि आज उसे क्या-क्या काम करने हैं। उसे याद आया कि आज तो बाज़ार जाना है। सोचते ही उसकी आँखों में चमक आ गई। सुनीता आज पहली बार बाज़ार जाने वाली थी। आठ बजे तक सुनीता नहा-धोकर तैयार हो गई। माँ ने मेज पर नाश्ता लगा दिया था। नाश्ता करते-करते उसने पूछा, “माँ बाज़ार से क्या-क्या लाना है ?” “एक किलो चीनी लानी है, माँ ने कहा।”

(क) सुनीता कितने बजे सोकर उठी? (1)

उत्तर- .....

(ख) सुनीता आज पहली बार क्या करने वाली थी ? (1)

उत्तर- .....

(ग) माँ ने मेज पर क्या लगा दिया ? (1)

उत्तर- .....

(घ) माँ ने सुनीता को बाज़ार से क्या लाने को कहा? (1)

उत्तर- .....

(ङ.) दिए गए वाक्य में **संज्ञा** (नाम वाले शब्द) शब्द पर गोला लगाओ । (1)

नाश्ता करते-करते उसने पूछा ।

**प्रश्न (3) अपठित गद्यांश को पढ़कर प्रश्नों के उत्तर लिखो । (10)**

छोटू दस साल का बच्चा था, जो ढाबे में बरतन मँजता था। घर पर उसका नाम सोहना था। उसका गाँव नदी किनारे था। माता-पिता सहित उसके दादा-दादी और छोटी बहन भी थे। वह कक्षा चार में पढ़ता था। वह बच्चों के साथ स्कूल जाता, बाग में खेलता और सुबह-शाम घर के बहुत सारे काम करता था। स्कूल में किताब खो जाने के कारण गुरु जी ने उसे डाँट दिया। घर पर पिता जी ने भी खूब सुनाया। उसके मन को ठेस लगी। रात में वह चुपचाप घर से भाग आया। वह ढाबे में बरतन धोने का काम करने लगा। घर जाने को उसका मन करता था लेकिन शर्म के कारण नहीं जा पाता था । एक दिन रोज़ की तरह छोटू गिलास धोने ट्रे में लेकर जा रहा था। सड़क पर बच्चे गेंद खेल रहे थे। वह भी खेलने लगा। अचानक मालिक आ गया। डर के मारे छोटू के हाथ से ट्रे छूट गई और गिलास टूट गए। मालिक डंडा लेकर झपटा। सोहना अब उठ खड़ा हुआ। वह अब छोटू नहीं था। वह अपने घर जाएगा, पढ़ेगा और जीवन सँवारेगा। सोहन तीर की भाँति सड़क पर पहुँच गया। उसकी आँखों में उसका गाँव और उसका सपना समाया हुआ था।

- (क) छोटू कितने साल का था ? (1)  
उत्तर- .....
- (ख) छोटू कौन सी कक्षा में पढ़ता था? (1)  
उत्तर- .....
- (ग) गुरु जी ने छोटू को क्यों डाँटा? (1)  
उत्तर- .....
- (घ) छोटू का घर पर क्या नाम था ? (1)  
उत्तर- .....
- (ङ) लिंग बदलो । (1)  
माता- .....
- (च) विलोम शब्द लिखो । (1)  
मालिक- .....
- (छ) समान अर्थ वाला शब्द लिखो । (1)  
किताब - .....
- (ज) नीचे लिखे वाक्य के सामने सही (✓) या गलत (X) का निशान लगाइए । (1)  
दिन में वह चुपचाप घर से भाग आया।
- (झ) खाली जगह भरो । (1)  
वह ढाबे में ..... का काम करने लगा।

(ज) गद्यांश का उचित शीर्षक चुनकर लिखिए । (1)

(सोहना / खोई किताब / मालिक)

.....

**(पाठ्य पुस्तक पर आधारित प्रश्न - 10 अंक)**

प्रश्न(4) नीचे लिखें प्रश्नों के उत्तर लिखो ।

(क) चूहे के अलावा कौन-कौन से शरारती जीव तुम्हारे घर में घुस जाते हैं?  
(किन्हीं दो के नाम लिखो) (1)

उत्तर- .....

(ख) बच्चों ने खाने पीने की चीज़े कहाँ रखी? (1)

उत्तर- .....

(ग) पढ़क्कू का नाम पढ़क्कू क्यों पड़ा होगा ? (2)

उत्तर- .....

.....

(घ) धनी बिन्नी की देखभाल कैसे करता था ? (2)

उत्तर- .....

.....

(ड) हुदहुद को कहीं 'हजामिन' चिड़िया और कहीं 'पदुबया' के नाम से पुकारते हैं क्यों? (2)

उत्तर- .....

.....


(च) भीखूभाई हर बार कम दाम देना चाहते थे। क्यों ? (2)

उत्तर- .....

.....

**(रचनात्मक लेखन पर आधारित प्रश्न - 10 अंक)**

प्रश्न(5)(क) दिए गए चित्र को देखकर अनुच्छेद लिखो। (पाँच वाक्य) (5)



.....

.....

.....

.....

.....

.....

.....

.....

.....

(ख) पाठ्य पुस्तक के आधार पर दिए गए किसी एक विषय पर पाँच वाक्य लिखो। (5)

भीखुभाई या हुदहुद या गांधी जी

.....

.....

.....

.....

.....

.....

.....

.....

.....

**(व्याकरण पर आधारित प्रश्न- 15 अंक)**

प्रश्न(6)

(क) शब्दों के समान अर्थ लिखो। (2)

(i) खलीता- .....

(ii) मंतिख- .....

(ख) लिंग बदलो । (2)

(i) पतीला - ..... (ii) मालिन - .....

(ग) बताओ, ये लोग क्या गढ़ते हैं? (2)

(i) ठठेरा - ..... (ii) कवि - .....

(घ) नीचे दिए गए शब्दों में सही जगह पर अनुस्वार ं या चंद्रबिन्दु ँ लगाओ। (2)

(i) बदगोभी - ..... (ii) बाध - .....

(ङ.) नीचे लिखी चीजों की विशेषता बताने वाले शब्द लिखो। (2)

उदा - काला चश्मा

(i) ..... पत्थर (ii) ..... झंडा

(च) किसी एक चीज़ का नाम बताओ जिसे फेंटते हैं । (1)

(i) .....

(छ) नीचे लिखे मुहावरों के अर्थ लिखकर वाक्य प्रयोग करो । (2)

पसीना बहाना

अर्थ - .....

वाक्य प्रयोग-

.....  
.....



(ज) कहानी मुफ्त ही मुफ्त में बताओ इनका क्या हुआ, ये घटे या बढ़े? (2)

(i) रास्ते की लम्बाई - ..... (ii) भीखुभाई की थकान - .....

**(शब्द भंडार पर आधारित प्रश्न -10 अंक)**

प्रश्न(7) (क) विलोम शब्द लिखो । (2)

(i) धूप ..... (ii) खट्टा .....

(ख) नीचे दिए गए शब्दों के अर्थ अक्षरजाल में ढूँढ कर लिखो। (2)

त	र्क	शा	स्त्र	म्र
रा	ज	त	क	ब
जू	स	री	मा	धो
रा	ज़	का	ल	खा
धो	क	म	ल	ड़

छल .....

ढंग .....

(ग) उदाहरण को पढ़ो और नीचे दी गई तालिका को आगे बढ़ाओ । (2)

उदा - अनार - फल

हुदहुद - .....

भारत - .....

(घ) ऐसे रंगों के नाम लिखो जो किसी चीज़ के नाम पर पड़े हों । (2)

चीज़ का नाम रंग का नाम

उदा - गुलाब

गुलाबी

बैंगन

.....

आसमान

.....

(ड) तुकवाले शब्द लिखो । (2)

(i) गढ़ना - ..... (ii) बैल - .....

**(वर्तनी पर आधारित प्रश्न -10 अंक )**

प्रश्न(8) (क) वाक्य शुद्ध करो । (2)

(i) मैं बहुत अच्छे से चलत हूँ ।

.....

(ii) लड़के ने फल खाई ।

.....

(ख) निम्नलिखित शब्दों के छूटे हुए अक्षर को लिखकर शुद्ध शब्द बनाओ ।

(i) उड़ख.....ला                      (ii) नौ.....वान                      (iii) श.....रत                      (3)

(ग) निम्नलिखित शब्दों के क्रम को बदलकर शुद्ध शब्द बनाओ ।

(2)

(i) नायलरि - .....                      (ii) कगील - .....

(घ) नीचे दिए गए शुद्ध शब्दों पर गोला लगाओ ।                      (3)

(i) तसवीर                      तस्वीर                      तस्विर

(ii) शत्याग्रह                      सत्याग्रिह                      सत्याग्रह

(iii) कुरसी                      कुर्सी                      कुरषी

**(सुलेख)**

प्रश्न(9) नीचे लिखे अनुच्छेद को सुंदर लेख में लिखिए ।

(5)

नेहरू जी ने गांधी जी के असहयोग आंदोलन को, जो उस समय चल रहा था, महान उद्देश्य की पूर्ति के लिए जरूरी बताया। नेहरू जी ने बताया कि इस आंदोलन में कैसे भाग लिया जाए। नेहरू जी ने संदेह होने पर निर्णय करने के लिए एक उपाय बताया। कोई ऐसा काम नहीं करना चाहिए जिसे दूसरों से छिपाने की इच्छा हो ।

.....

.....

.....

.....

.....

.....

.....

.....

.....

.....

.....



परमाणु ऊर्जा शिक्षण संस्था  
Atomic Energy Education Society

वार्षिक परीक्षा- अभ्यास प्रश्नपत्र-III/ Annual Examination Practice Paper-III

कक्षा/Class : 4

अवधि/Duration : 3 घंटे

विषय/Subject : हिन्दी

अधिकतम अंक/Maximum Marks: 80

वाचन पर आधारित प्रश्न - 20 अंक

1. पठित गद्यांशको पढ़कर नीचे लिखे प्रश्नों के उत्तर दो।

अगले दिन जैसे ही सूरज निकला, धनी बिस्तर छोड़कर गांधी जी को ढूँढ़ने निकला। वे गौशाला में गायों को देख रहे थे। फिर वे सब्जी के बगीचे में मटर और बंदगोभी देखते हुए बिंदा से बात करने लगे। धनी और बिन्नी लगातार उनके पीछे-पीछे चल रहे थे। अंत में, गांधी जी अपनी झोंपड़ी की ओर चले। बरामदे में चरखे के पास बैठ कर उन्होंने धनी को पुकारा, “यहाँ आओ, बेटा !”

i) गायों को कौन देख रहा था? (1)

क) बिंदा

ख) गांधी जी

ग) धनी

ii) “यहाँ आओ, बेटा !” किसने कहा? (1)

क) गांधी जी

ख) धनी

ग) बिंदा

iii) धनी गांधी जी को कब ढूँढ़ने निकला? (1)

क) सुबह

ख) शाम

ग) रात

iv) शब्द बनाओ। दे रा म ब - \_\_\_\_\_ (1)

v) वाक्य पूरा करो। (1)

वे सब्जी के बगीचे में मटर और बंदगोभी देखते हुए \_\_\_\_\_

## .2पठित गद्यांश को पढ़कर नीचे लिखे प्रश्नों के उत्तर दो ।

एक दिन भीखूभाई का मन नारियल खाने का हुआ। उसके बारे में सोचते ही भीखूभाई ने अपने होठों को चटकारा, “वाह क्या मीठा-मीठा सा स्वाद होगा !” लेकिन एक छोटी-सी समस्या थी। घर में तो एक भी नारियल नहीं था। “ओहो ! अब मुझे बाज़ार जाना पड़ेगा,” उन्होंने अपनी पत्नी लाभुबेन से कहा। लाभुबेन अपने कंधे उचकाकर बोलीं, “खाना है तो जाना है।” एक समस्या और थी। भीखूभाई ने कहा, “पैसे खर्च करने पड़ेंगे,” लाभुबेन बोली, “हाँ। पैसे तो खर्च करने पड़ेंगे।”

- i) किसका मन नारियल खाने का हुआ था? (1)  
क) लाभुबेन                      ख) भीखूभाई                      ग) माली
- ii) “खाना है तो जाना है।” किसने कहा? \_\_\_\_\_ (1)
- iii) “पैसे खर्च करने पड़ेंगे।” किसने कहा? \_\_\_\_\_ (1)
- iv) लिंग बदलो।                      पत्नी - \_\_\_\_\_ (1)
- v) विलोम शब्द लिखो।                      स्वाद - \_\_\_\_\_ (1)

## .3अपठित गद्यांश को पढ़कर नीचे लिखे प्रश्नों के उत्तर दो।

मनुष्य की विशेषता उसके चरित्र में है। चरित्र के कारण ही एक मनुष्य दूसरे से अधिक आदरणीय समझा जाता है। विद्या का मान सज्जन तभी करते हैं जब विद्यावान विनय एवं चरित्र से युक्त हो। विद्या, बल तथा पद होते हुए भी रावण अपने राक्षसी कर्म के कारण निंदनीय था। रावण विद्यावान होने पर भी वंदनीय नहीं बन पाया। मनुष्य का मूल्य उसके चरित्र में है। विनय, उदारता, लालच में न पड़ना। धैर्य, सत्य भाषण, वचन का प्रतिपालन करना और कर्तव्य परायण ये सब गुण चरित्र में आते हैं।

i) मनुष्य की विशेषता किसमें है? (1)क)

उसके पद में                      ख) उसके धन में                      ग) उसके चरित्र में

ii)मनुष्य का आदर किन कारणों से होता है? (1)

क) चरित्र के कारण                      ख) पद के कारण

ग) विचार के कारण                      घ) तीनों विकल्प सही हैं

iii)रावण निंदनीय क्यों था? (1)

क) विद्या के कारण                      ख) बल के कारण                      ग) राक्षसी कर्म के कारण

iv) चरित्र में कौन-कौन से गुण आते हैं ? (1)

क) विनय और उदारता                      ख) सत्य और चैर्य

ग) कर्तव्य परायण                      घ)उपरोक्त सभी

v)'सत्य' शब्द का विलोम शब्द है- (1)

क) सच                      ख) असत्य                      ग) महा सत्य

vi' (कर्म - का समान अर्थ है ' (1)

क) काम                      ख) कम                      ग) कल

viiउपरोक्त अनुच्छेद से संयुक्ताक्षर वाला एक शब्द (खोजकर लिखो । (1)

\_\_\_\_\_

viii (शब्द बनाओ।                      द आ र य णी - \_\_\_\_\_ (1)

ix वाला एक शब्द ( ं ) उपरोक्त अनुच्छेद से अनुस्वार (खोजकर लिखो । (1)

\_\_\_\_\_

x उपरोक्त अनुच्छेद के लिए उचित शीर्षक लिखो। (1)

पाठ्य पुस्तक पर आधारित प्रश्न 10 -अंक

.4“पढ़कू की सूझ” कविता के कवि कौन हैं? (1)

क) ममता पण्ड्या      ख) सुभद्रा सेन गुप्ता      ग) रामधारी सिंह दिनकर

.5“मुफ्त ही मुफ्त” कथा कहाँ की लोककथा है? (1)

क) बिहार की      ख) गुजरात की      ग) झारखंड की

.6“कौन?” कविता के आधार पर लिखो। (2)

क) कुतरा जा सकता है - \_\_\_\_\_

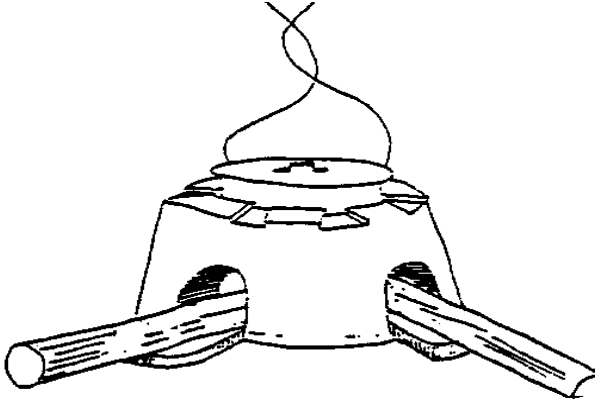
ख) बिखराया जा सकता है - \_\_\_\_\_

.7“थप्प रोटी थप्प दाल” नाटक में बच्चे रोटी बनाने का खेल खेलते हैं। तुम अपने साथियों के साथ कौन-कौन से खेलते हो? (2)

.8नाम लिखो। (2)

क)      ख)





\_\_\_\_\_

\_\_\_\_\_

.9 “हुदहुद” पक्षी को और भी कई नामों से जाना जाता है। कोई दो नाम लिखो। (2)

\_\_\_\_\_

\_\_\_\_\_

**रचनात्मक लेखन पर आधारित प्रश्न अंक 10 -**

.10 सुनीता को पत्र लिखकर अपने मनोभाव व्यक्त करो। (5)

**अथवा**

“हुदहुद” के बारे में एक अनुच्छेद लिखो। ( 100 – 75 शब्दों में )

\_\_\_\_\_

\_\_\_\_\_

\_\_\_\_\_

\_\_\_\_\_

\_\_\_\_\_

\_\_\_\_\_

---

---

---

---

---

---

---

---

---

---

---

---

---

---

---

---

---

---

---

---

---

---

.11अपने आस - पास की ऐसी जगह के बारे में लिखो, जहाँ बहुत शोर होता है।  
लगभग (शब्दों में 100 - 75) (5)

---

---

---

---

---

---

---

---

---

---

---

---

---

---

---

---

---

---

---

---

---

---

---

व्याकरण पर आधारित प्रश्न 15 - अंक

.12 लिंग बदलो। )2(

क) माली - \_\_\_\_\_ ख) काका - \_\_\_\_\_

.13 नीचे दी गई चीज़ों की विशेषता बताने वाले शब्द लिखो। )3(

क) \_\_\_\_\_ पत्थर

ख) \_\_\_\_\_ नमक

ग) \_\_\_\_\_ झण्डा

.14 नीचे लिखे शब्दों में सही स्थान पर अनुस्वार (ं) या चन्द्रबिन्दु (ँ) लगाओ।

(3)

क) स्वतत्र ख) पसद ग) गाव

“ .15 दिन - रात एक करना - मुहावरा का अर्थ है ” )1(

क) बहुत रात होना ख) बहुत मेहनत करना ग) सुबह होना

.16 वचन बदलो। )2(

क) बकरी - \_\_\_\_\_ ख) रोटी - \_\_\_\_\_

17. समान अर्थ लिखो। )2(

क) शू छे - \_\_\_\_\_ ख) पागुर - \_\_\_\_\_

18. हुदहुद एक बहुत ही सुंदर पक्षी है। हुदहुद और पक्षी, दोनों को ही हम संजा कहते हैं। अब नीचे दिए गए उदाहरण के अनुसार खाली स्थान भरो। (2)

हुदहुद	पक्षी
भारत	देश
अनार	
टमाटर	

**शब्द भण्डार पर आधारित प्रश्न 10 - अंक**

19. ऐसे कुछ रंगों के नाम लिखो जो किसी चीज़ के नाम पर पड़े हों। (2)

उदाहरण : आसमान आसमानी

जामुन जामुनी

बादाम \_\_\_\_\_

बैंगन \_\_\_\_\_

20. एक शब्द में उत्तर दो। (2)

क (जो कविता लिखता है) \_\_\_\_\_ -

ख (जो मिट्टी के बर्तन बनाता है) \_\_\_\_\_ -

2 नीचे दिए गए वाक्यों को शुद्ध करके लिखो .1। (2)

क वह लड़ (की बैठ गया।

---

ख (मेरा माँ खाना बनाता है।

---

22 . निम्न वाक्यों को अपने तरीके से लिखो । (2)

क (बैल हमारा नहीं अभी तक मंतिख पढ़ पाया है।

---

ख(जहाँ न कोई बात, वहाँ भी नई बात गढ़ते थे।

---

23. एक ही शब्द के दो अलग - अलग अर्थ लिखो। (2)

उदाहरण : भेंट -1. उपहार                      2. मुलाकात

हार - \_\_\_\_\_

### वर्तनी पर आधारित प्रश्न 10 - अंक

24. नीचे दिए गए शब्दों में से शुद्ध वर्तनी वाले शब्द को खोज कर गोला लगाओ।

क(विख्यात                      विख्यात                      बिख्यात                      (1)

ख (नरहनी                      नहरनी                      नहरानी                      (1)

ग (बदनरगाह                      बंदरगह                      बंदरगाह                      (1)

घ(धान्यवाद            धन्यवाद            धनयवाद            (1)

ड) तर्कशास्त्र            तर्कशातर            तर्कशस्त्र            (1)

25 .निम्न शब्दों को पूरा करो ।            (3)

क( प्र \_\_\_\_\_ त्न            ख (नौ \_\_\_\_\_ वान            ग (शरा \_\_\_\_\_ त

26 .सही तरीके से लिखकर शब्द बनाओ।            (2)

क) र ई सो र घ - \_\_\_\_\_ ख) ल य रि ना - \_\_\_\_\_

### सुलेख 5 - अंक

27. नीचे दिए गए अनुच्छेद को सुंदर अक्षरों में लिखो ।            (5)

संतोष रूपी धन के सामने अन्य सभी प्रकार के धन धूल के समान व्यर्थ हैं। मनुष्य के पास अनेक प्रकार के धन हो सकते हैं-सुख-सुविधाओं के रूप में या पैसे के रूप में, परंतु इनमें से किसी भी प्रकार का धन मनुष्य को सच्चा सुख नहीं देता। धन को प्राप्त करने पर तृप्ति नहीं होती, बल्कि अधिकाधिक प्राप्त करने की लालसा उत्पन्न होती है। मनुष्य सदा असंतुष्ट रहता है और नैतिक मूल्यों को ताक पर रखकर गलत काम करने में भी नहीं हिचकिचाता, परंतु जब मनुष्य संतोष रूपी धन प्राप्त कर लेता है, तो सारी इच्छाएँ और लोभ स्वयं समाप्त हो जाते हैं। संतोष रूपी धन प्राप्त हो जाने पर अन्य सभी प्रकार के धन निरर्थक प्रतीत होते हैं।

---

---

---

---

---

---

---

---

---

---

---

---

---

---

---

---

---

---

---

---

---

---

---

---



परमाणु ऊर्जा शिक्षण संस्था  
Atomic Energy Education Society

वार्षिक परीक्षा- अभ्यास प्रश्नपत्र-I / Annual Examination Practice Paper-I

कक्षा/Class : IV

अवधि / Duration : 3 Hours

विषय/Subject : Mathematics

अधिकतम अंक/Maximum Marks : 80

Section A : Knowledge ( 20 marks )

1. Fill in the gaps with the correct answer. ( 6 x 1 = 6 )

a. We can trace a circle with a \_\_\_\_\_.



- i. book      ii. coin      iii. brick

b. \_\_\_\_\_ grams + 200 grams = 1 kilogram

- i. 500      ii. 250      iii. 800

c. 24 plants can be arranged in \_\_\_\_\_ rows with 8 plants each.


- i. 3      ii. 6      iii. 7

d. If  is equal to 4 trees, then  is equal to \_\_\_\_\_ trees.

- i. 20      ii. 16      iii. 4

e. The boundary of a square is 60 cm, then the length of its side is \_\_\_\_\_ cm.

- i. 10      ii. 5      iii. 15

f. Upside down of  the given figure is \_\_\_\_\_

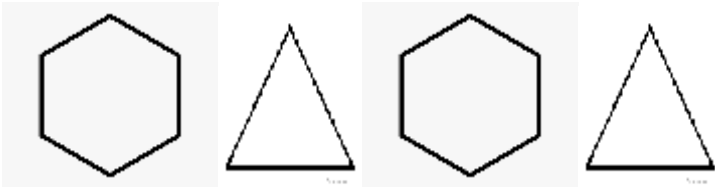
- i.       ii.       iii. 



2. Solve the following.

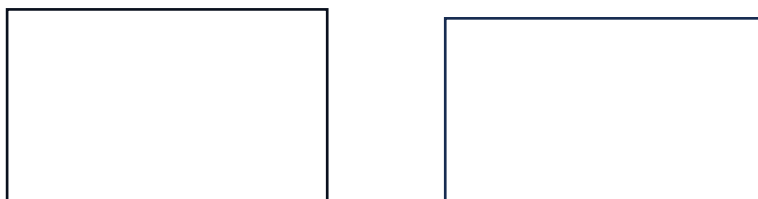
( 5x 2 = 10 )

a. Complete the patterns.

- i.  \_\_\_\_\_, \_\_\_\_\_
- ii. 100Z , 99Y , 98X , 97W , \_\_\_\_\_ , \_\_\_\_\_

b. Draw a circle with radius 3 cm. Also mark its centre and radius.

c. Show two different ways to cut the given rectangles into two equal halves.



d. Read the given statement carefully and frame a question.

**There are 13 pens in a packet. Kiya bought 9 such packets.**

---

---


Find the solution for the problem.

e. Find the boundary of a garden of length 720 m and width 600 m.

3. Observe the smart chart and answer the following questions. (4x1=4)

### The Sports Club

★ This shows 6 children



- How many children are interested in hockey? \_\_\_\_\_
- Which is more – Kabaddi or Football? \_\_\_\_\_
- Which game is liked by most of the children? \_\_\_\_\_
- What is the difference between the number of students interested in Hockey and Kabaddi? \_\_\_\_\_

**Section B : Understanding ( 20 marks )**

**4. Fill in the gaps. ( 6 x 1 = 6 )**

- a. The radius of a circle is 5 cm. Then the length of the diameter is \_\_\_\_\_ cm.
- b. 175 paise = Rs \_\_\_\_\_
- c. You can make a table of \_\_\_\_\_ with the tables of 6 and 3.
- d. The area of a square of side 7 cm is equal to \_\_\_\_\_sq. cm.
- e. There are \_\_\_\_\_ quarters in a whole.
- f. 1 Kilogram of cotton is equal to \_\_\_\_\_ Kilogram of iron.

**5. Do as directed. ( 5 x 2 = 10 )**

- a. Draw a design with a circle and colour.

b. Colour quarter of the given figures.

Figure. (I)

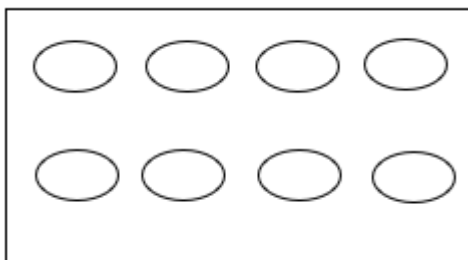

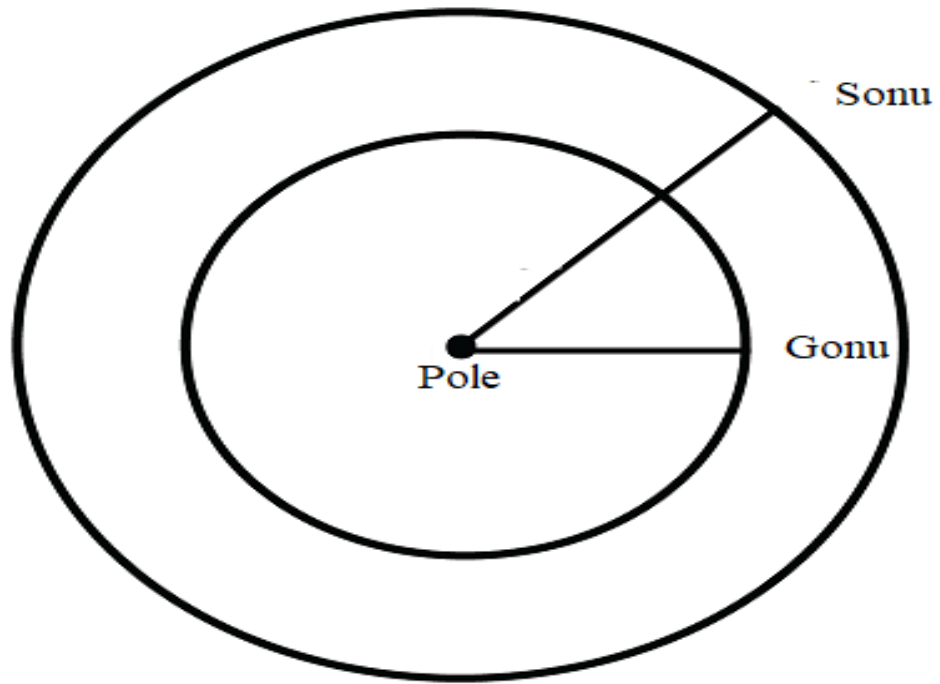


Figure (II)





c. Sonu and Gonu are goats. They are tied to a pole with ropes in a field.  
Sonu has a longer rope.

i. Who can look for more grass to eat?

---

ii. Why?

---

---

d. Munni made a garland of 19 flowers. How many garlands can she make with 76 flowers?( using repeated subtraction method )

e. How will you balance the weights to weigh



i. Firewood of 3 kg?



ii. Firewood of 8 kg?



6. Look the pricelist chart and solve the question given below. (4)

Items	Price in Rs per kg
Apples	40
Mangoes	64
Oranges	100
Pomegranates	60

a. The cost of 2 kg oranges is \_\_\_\_\_ . ( 1 )

b. Ajay wants to buy  $\frac{1}{2}$ kg mangoes and  $\frac{1}{4}$  kg pomegranates. Find the total cost. ( 2 )

c. If Ajay paid Rs 100, how much money will he get back? ( 1 )

**Section C : Ability to compute ( 20 marks )**

**7. Say true or false. ( 4 x1 = 4 )**

a. A cardboard top will spin the best when you make the hole at its centre.

(                      )

b.  $3\text{ m} + \frac{1}{2}\text{ m} = 325\text{ cm}$  (                      )

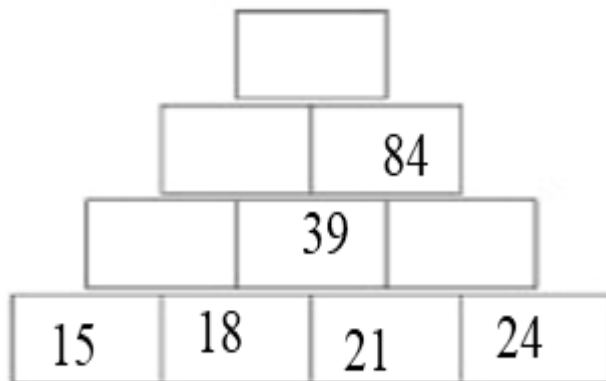
c. 14 chickens have 56 legs. (                      )

d. We buy 250 g of Tea powder. (                      )

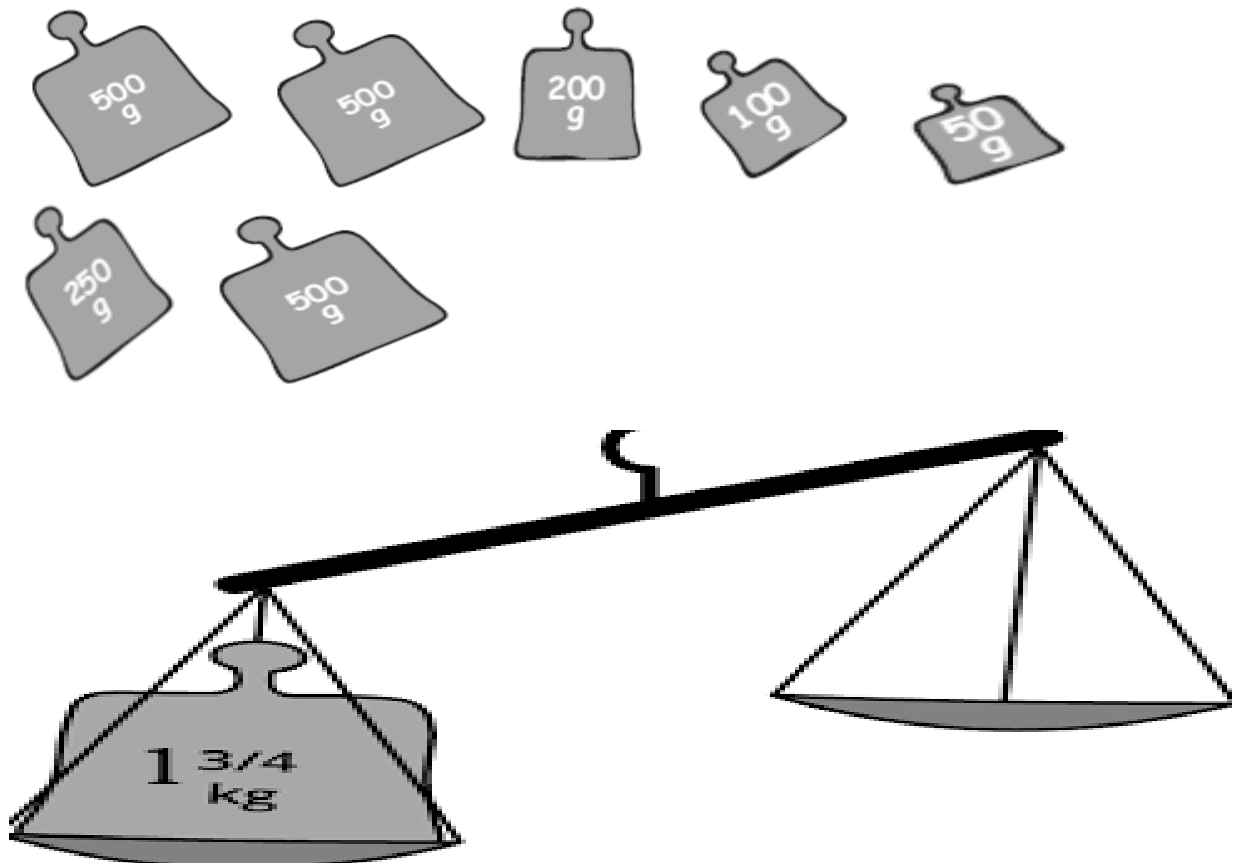
8. Do as directed.

( 6 x 2 = 12 )

a. Complete the number tower



b. Balance the weights on both sides of the pan by using the weights given below.



c. Divide 543 by 8 and write

Quotient \_\_\_\_\_

Remainder \_\_\_\_\_


d. If  $A = 1$ ,  $B = 2$ ,  $C = 3$  and so on, then find the secret message for the code given below.

7	15	15	4
---	----	----	---

4	1	25
---	---	----

---

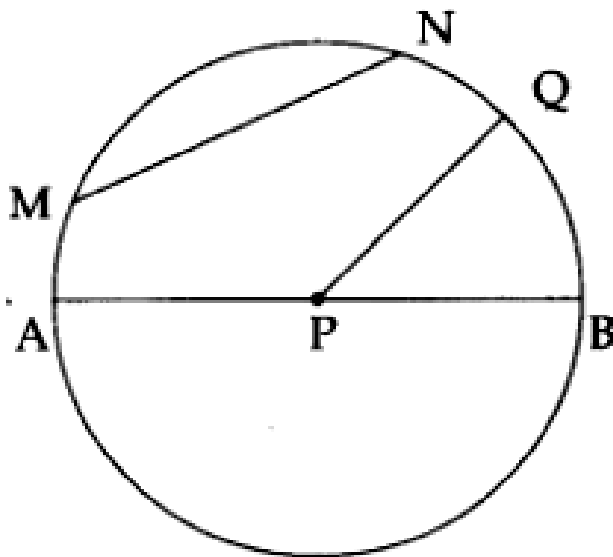
e. How many squares of side 1 cm can fill this rectangle.





- 
- f. Chintu needs stamps of Rs 20 for his parcel. He went to the post office. Only stamps of Re1, Rs 2, Rs 5 and Rs10 were there at that time. Using those stamps, show any two different ways by which he can make Rs20?
- 
- 

9. Look at the following figure and fill in the gaps. ( 4 x 1 = 4 )



- a. \_\_\_\_\_ is the radius of the circle.
- b. \_\_\_\_\_ is the chord of the circle.
- c. \_\_\_\_\_ is the diameter of the circle.
- d. \_\_\_\_\_ is the center of the circle.

**Section D: Problem Solving Ability ( 20 marks )**

**10. Fill in the gaps.**

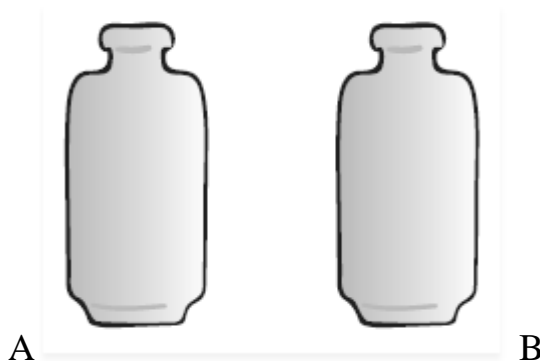
**( 4 x 1= 4 )**

- a. The diameters meet at the \_\_\_\_\_ of the circle.
- b. In a classroom of 80 kids, one-fourth of them are boys. The number of girls are \_\_\_\_\_.
- c. If **TBE** is written as **SAD**, the secret code for **IBQQZ** is \_\_\_\_\_.
- d. Starting from 0, a rabbit jumps 4 steps at a time. He reaches \_\_\_\_\_ after taking 12 jumps.

**11.Solve.**

**( 6 x 2 = 12 )**

- a. Aman poured  $\frac{1}{2}$  litre of milk into 2 bottles so that each bottle has  $\frac{1}{4}$  litre of milk.
  - i. Shade the level of milk in each bottle.



- ii. How many millilitres of milk does each bottle have?

Bottle A = \_\_\_\_\_

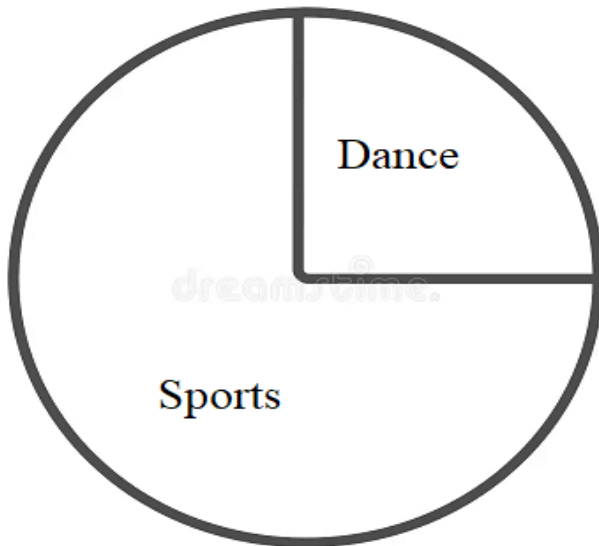
Bottle B = \_\_\_\_\_

- b. Write the letters **P, Q and R** in the boxes so that no letter comes twice in any line.


- c. Asha earns Rs 9000 per month. How much does she earn for a week?  
( 1 month = 30 days )

- d. Draw any two different shapes by joining three squares.


- e. There are 36 children in a class. The chapathi chart shows the number of children in different clubs.



i. What part of children chose dance club?

\_\_\_\_\_

ii. The number of children who chose sports club is \_\_\_\_\_.

f. Look at the Postal Rates in the given table below and answer the following questions.

<i>Postal Rates</i>	
<i>Postal Items</i>	<i>Postal Rates (in ₹)</i>
Single Post Card	0.50
Printed Post Card	6.00
Inland Letter	2.50
Letter weighing	
(i) 20 grams or less	5.00
(ii) For every additional 20 gms	2.00
Parcel weighing	
(i) 50 grams or less	5.00
(ii) For every additional 50 grams	3.00

i. How much will you have to pay for stamps on a letter weighing 40 grams?

ii. How much will you have to pay for a parcel weighing 100 grams?

**12. Solve.**

**( 4 x 1 =4 )**

Vicky wants change for 1000 rupees. How many notes will he get if he wants in return -----

- All 50 rupee notes? \_\_\_\_\_
- All 100 rupee notes? \_\_\_\_\_
- All 200 rupee notes? \_\_\_\_\_
- All 500 rupee notes? \_\_\_\_\_



**परमाणु ऊर्जा शिक्षण संस्था**  
**Atomic Energy Education Society**

**वार्षिक परीक्षा- अभ्यास प्रश्नपत्र-II / Annual Examination Practice Paper-II**

कक्षा / Class : IV

अवधि / Duration : 3hours

विषय / Subject : Mathematics

अधिकतम अंक / Maximum Marks : 80

**Section-A (20 Marks)**

**1. Choose the correct answer and fill in the blank (1 X6=6mks)**

a) A \_\_\_\_\_ is used to draw a circle .

i) scale

ii) Compass

iii) pin

b) Three-quarter of a rupee is \_\_\_\_\_ paise.

i) 15

ii) 35

iii) 75

c)  $\frac{1}{4}$  metre = \_\_\_\_\_ cm

i) 25

ii) 45

iii)90

d) The table of 9 and \_\_\_\_\_ is used for writing the table of 12.

i) 7

ii) 3

iii) 4

e) 6 kg and 60g = \_\_\_\_\_ g

i) 666

ii) 660

iii) 606

f)  $428 \div 2 =$  \_\_\_\_\_

i) 212

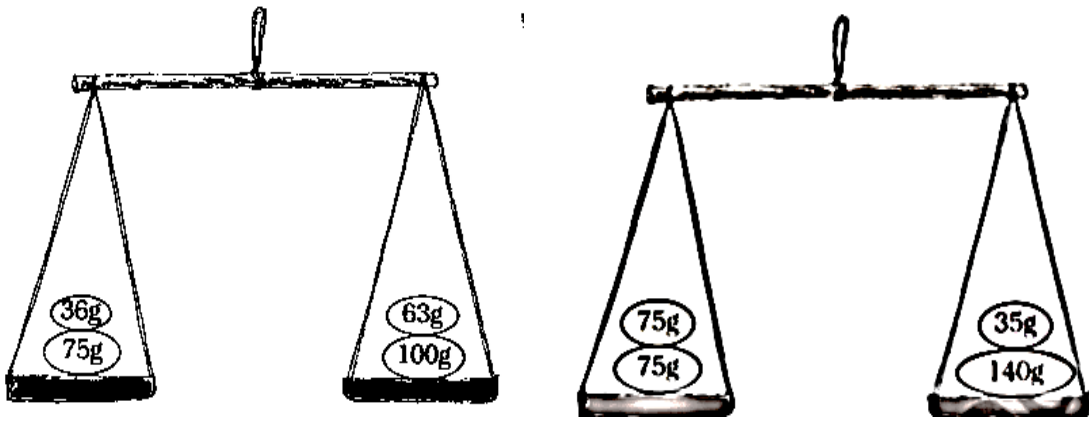
ii)213

iii)214

2. Do as directed.

(2 X 5 = 10mks)

a) Which pan of the balance will go down? Show by drawing an arrow. ↓



b) Help Bunty to make the table of 7, using tables of 4 and 3.

Table of 4

$1 \times 4$	$2 \times 4$	$3 \times 4$	$4 \times 4$	$5 \times 4$
4	8	12		

Table of 3

$1 \times 3$	$2 \times 3$	$3 \times 3$	$4 \times 3$	$5 \times 3$
3	6	9		

Table of 7

7				
---	--	--	--	--

c) Complete the picture by drawing the other Half.



d) Dinesan went to a shop and bought some things .Write the weight of each thing he bought -in g and kg.

ITEMS	WEIGHT IN g/Kg
SUGAR	5 _____
MUSTARD SEEDS	50 _____
WHEAT	3 _____
PEPPER	30 _____

e) Billo has packed 28 cat -paw socks for his friend's cats . How many cats did his friend have ?

3.Using a compass ,.Draw 2 circles with the same centre O . The smaller circle having radius = 4cms and bigger circle with radius =6 cms .Look at the reference figure for help. **(4mks)**





**Section-B (20 Marks)**

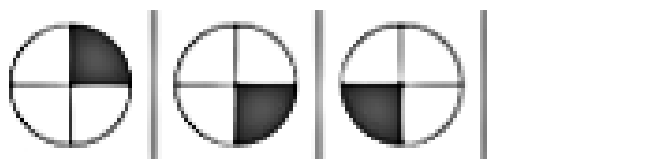
**1.Fill in the blanks**

**(1 X6=6mks)**

a)  $5\text{kg} = \underline{\hspace{2cm}}\text{g}$

b)  $4\text{ weeks} = \underline{\hspace{2cm}}\text{ days}$

c) Complete the pattern.



d) Colour half the items. OOOOOOOOOOOO

e)  $70 \div 5 = \underline{\hspace{2cm}}$


f)  $12 \times 3 = \underline{\hspace{2cm}}$

**2. Do as directed.**

**(2 X5= 10mks)**

a) Divide the following rectangle into

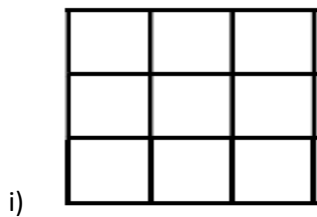
i) 4 equal parts




ii) half



b) Colour that part of the shape which is written below.



$\frac{2}{3}$



$\frac{1}{4}$

c) Find out from the table:

i) The total number of children \_\_\_\_\_.

ii) Children who like milk are  $\frac{1}{3}$  or  $\frac{1}{4}$  of the total children (Tick the correct answer)

The drink children like	Number of Children
Milk	12
Coffee	15
Tea	9
Total	_____

d) Complete the magic square using numbers 1-9 (without repeating the number).

Rule: The numbers on each line add up to 15.



e) There are 350 bricks in a hand -cart .The weight of a brick is 3kg ? What will be the weight of all the bricks ? \_\_\_\_\_ kg

**3. Follow the rule and complete the code for the given message . (4mks)**

Rule : ‘J’ is 10 . ‘P’ is 16 .So JUMP IS 10 21 13 16

Using above rule, Complete this List of letters and Numbers to help you code

A	B	C	D	E	F	G	H	I	J	K	L	M	N	O	P	Q	R	S	T	U	V	W	X	Y	Z
									10			13			16					21					

Using the above rule write the code for the given message in the boxes below.

W	H	A	T		A	R	E		Y	O	U		L	E	A	R	N	I	N	G				

### Section-C (20 Marks)

#### 1. Fill in the blanks.

(1 X 6=6mks)

a) \_\_\_\_\_ part is coloured in the given picture.



b) Complete the pattern



c) Length of the boundary is sum of all the \_\_\_\_\_ of the figure .

d) We need a \_\_\_\_\_ to measure the weight of objects.

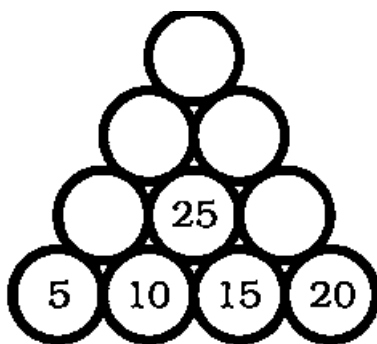
e)  $54\text{m} = \text{_____ cms}$

f) The length of Chandu's field is 90m. Chandu's father covers \_\_\_\_\_ m after walking 4 rounds around the field.

#### 2. Do as directed

(2 X 6= 12mks)

a) Complete the number tower



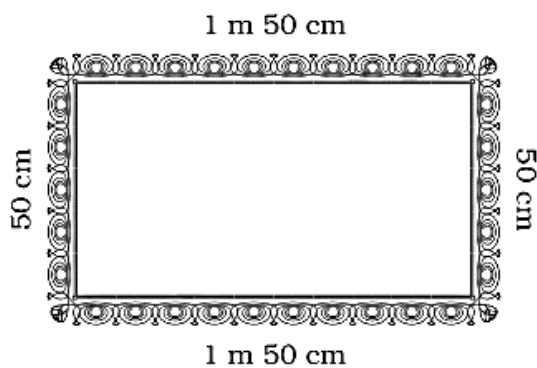
b) Observe the pattern and take them forward.

i) ABC , DEF , GHI , \_\_\_\_\_ , \_\_\_\_\_ .

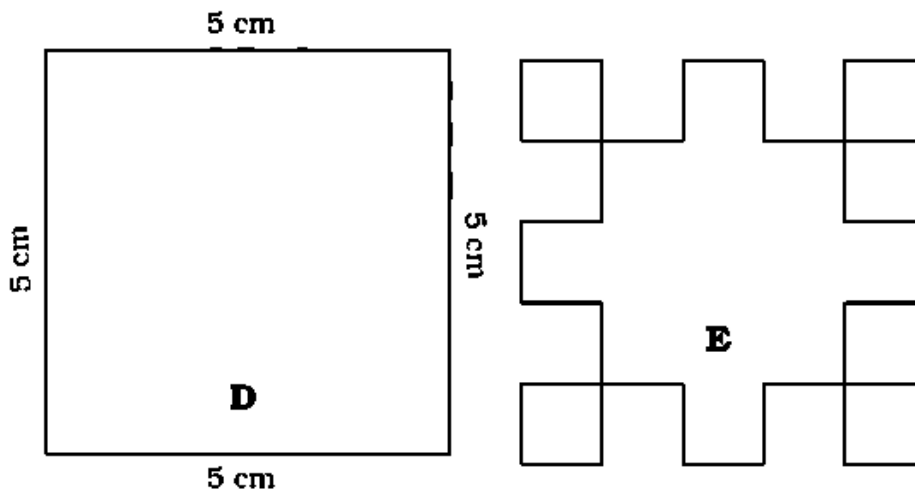
ii) 9 , 18 , 27 , \_\_\_\_\_ , \_\_\_\_\_ .

c) A frog jumps 3 steps at a time and a rabbit jumps 4 steps at a time starting from 0. Then the frog has taken \_\_\_\_\_ jumps, if he's on 36.  
Who will reach the number 36 first? \_\_\_\_\_


d). Look at the picture of the table cloth. Sita has 80 metres of lace to put around the table cloth. How much lace is used for one table cloth? \_\_\_\_\_ m  
How much lace will be used in 3 such table cloths? \_\_\_\_\_ m  
How much lace will remain with Sita? \_\_\_\_\_ m



e) Find the length of the boundary of square D. \_\_\_\_\_ cms  
8 squares of side 1 cm are cut out of the square D. Now it looks like shape E. What is the length of the boundary of shape E? \_\_\_\_\_ cms



f) Seema and Teresa are running a race. Seema is running on the inner circle. Teresa is running on the outer circle. Teresa runs faster than Seema. But still she loses the race. Can you guess why?



---

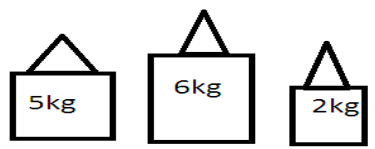
---

---

---

---


3. Help Abdul to weigh firewood .He has only 5 kg . 6kg and 2 kg weights



with him .

(2mks)

One is done for you : 7kg fire wood



i) 4kg fire wood



ii) 3kg firewood



### Section-D (20 Marks)

1. Read the data on the food grains people eat and answer these questions.

(1 X 4= 4mks)

Main Food	Number of Persons
Rice	45
Wheat	15
Jowar	36
Ragi	23

i) Most people eat foods made from \_\_\_\_\_

ii) Compared to those who eat wheat, people eating Rice are \_\_\_\_\_ more / less.

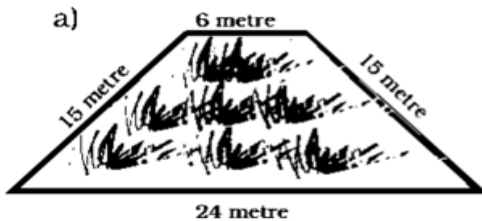
iii) Compared to people who eat Jowar ,those who eat ragi are \_\_\_\_\_ more /less/ equal .

iv) Food grain least eaten by people \_\_\_\_\_ .

**2. Do as directed .**

**(2 X 6 = 12mks )**

a) .Here are pictures of some more fields. Find out which one has the longest boundary.



Boundary = \_\_\_\_\_ metre

Boundary = \_\_\_\_\_ metre

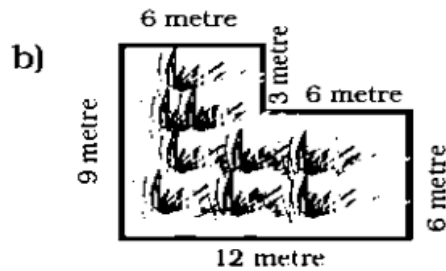
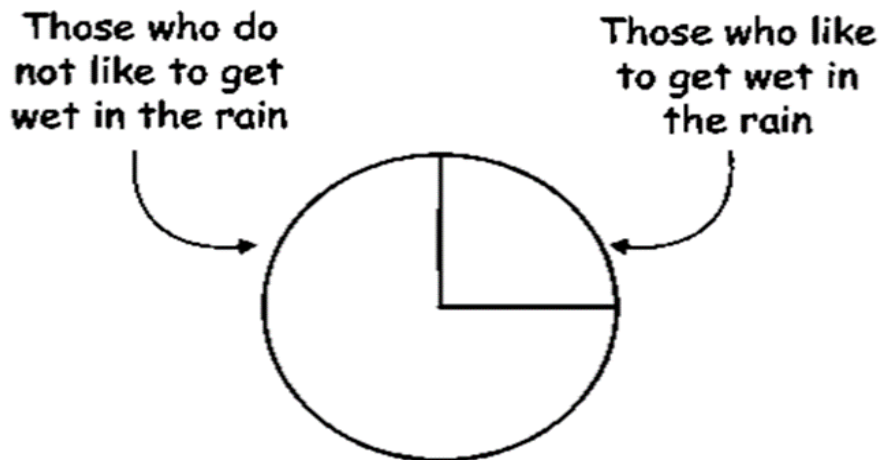


Figure \_\_\_\_\_ has the longest boundary.

b) See the Chapati Chart and tell:



1) How many children like to get wet in the rain?



a) half

b) one-fourth

c) three-fourth

2) If the number of children in the class is 32, then tell the number of children who do not like to get wet in the rain \_\_\_\_\_

c) Ravi wants a pencil . It costs Rs 2 .He gives a one-rupee coin ,one quarter - rupee coin .Is it enough ? \_\_\_\_\_(Yes/No ).How much is less ? \_\_\_\_\_.

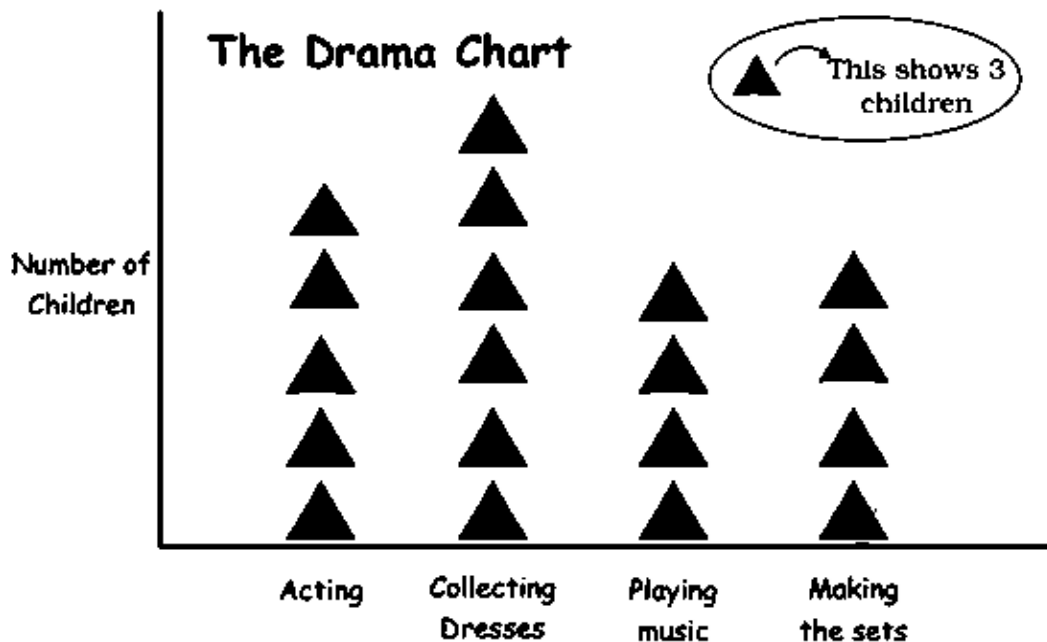
d) Rani wants change for Rs 500.

How many notes will she get if she wants in return —

i) All 20 rupee notes? \_\_\_\_\_

ii) All 5 rupee notes? \_\_\_\_\_

e) Answer the following questions looking at the drama chart.



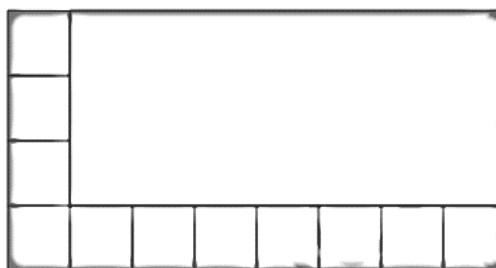
i) How many children are collecting dresses?

---

ii) Which activities are having equal number of Children?

---

f) How many squares of one centimetre can fill this rectangle? (In the given figure side of each square is 1cm.)



\_\_\_\_\_ squares.

3. Look at the Postal Rates in the table given below and answer the following questions. (1 X4=4mks)

<b>Postal Rates</b>	
<b>Postal Items</b>	<b>Postal Rates (in Rs)</b>
Single post card	0.50
Printed post card	6.00
Inland letter	2.50
Letter weighing-	
(i) 20 grams or less	5.00
(ii) For every additional 20 grams	2.00
Parcel weighing-	
(i) 50 grams or less	5.00
(ii) For every addition 50 grams	3.00

i) Find the cost of 5 postcards \_\_\_\_\_

ii) Find the cost of 2 Inland Letters \_\_\_\_\_

(iii) How much will you have to pay for stamps on a letter weighing 50grams

(iv). Find out the cost of sending a parcel. of 100grams



परमाणु ऊर्जा शिक्षण संस्था  
Atomic Energy Education Society

वार्षिक परीक्षा- अभ्यास प्रश्नपत्र-III / Annual Examination Practice Paper-III

कक्षा / Class : IV

अवधि / Duration : 3 hours

विषय / Subject : Mathematics

अधिकतम अंक / Maximum Marks : 80

Section A : Knowledge (20 marks)

I. Choose the correct option and tick ( $\checkmark$ ) the answer. (1x6=6)

1) The diameter of a circle is \_\_\_\_\_ its radius.

- a) half      b) double      c) thrice

2) Two and half litres are equal to \_\_\_\_\_ ml.

- a) 2 ½      b) 2500      c) 2.5

3) What is the next one in the given pattern ?

AB99    CD88    EF77    GH66    \_\_\_\_\_

- a) KL55      b) IJ55      c) MN55

4) The weight of an orange will be \_\_\_\_\_ approximately.

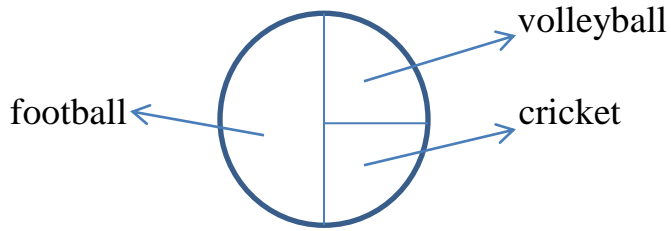
- a) 1 kg      b) 150 g      c) 1.2 kg

5) The length of the boundary of a triangle whose each side is equal to 5 cm

will be \_\_\_\_\_.

- a) 15 cm      b) 10 cm      c) 20 cm

6)



The above Chapatti chart shows the favourite games of class IV students.

What part of the total children like to play volleyball? \_\_\_\_\_

a)  $\frac{1}{4}$

b)  $\frac{1}{2}$

c)  $\frac{3}{4}$

**II. Solve the following.**


**(2x5=10)**

1) Rajesh has attended school for 147 days. For how many weeks was he present ? (1 week = 7 days)

2) A maid earns Rs. 220 daily. How much will she earn in the month of May ?  
(May = 31 days)

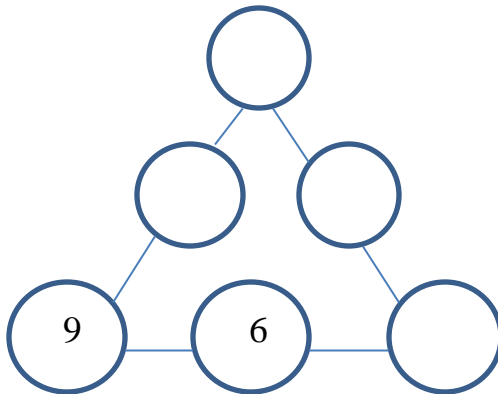
3) Draw circles of radius 3 cm and 4 cm with a common centre. Mark the common centre 'O'.

4) Cut the rectangles into four equal parts in two different ways.



5) Use numbers from 5 to 10 to make your own magic triangle.

Rule : Numbers on each side adds up to 22.



**III. Answer the following as directed.**

**(2x2=4)**

1) Weight of a parcel = 250 g

Postal rate -


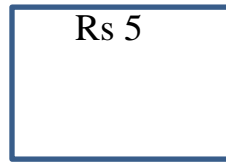
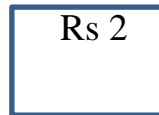
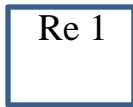
- 50 g or less – Rs. 10

- For every additional 50 g – Rs. 5

Find the cost of sending the parcel.

\_\_\_\_\_ = \_\_\_\_\_

2) The following stamps are there in a post office.



Use these stamps to make stamps of Rs 25 in two different ways.

i) \_\_\_\_\_ = Rs 25

ii) \_\_\_\_\_ = Rs 25

### Section B : Understanding (20 marks)

**I. Choose the correct option and fill in the gaps. (1x6=6)**

1) If we know the tables of 6 and 2, we can make the table of \_\_\_\_\_.

(10/12/14)

2) A circle has \_\_\_\_\_ centre. (three/two/one)

3)  $\frac{3}{4}$  of a kilogram = \_\_\_\_\_ grams. (750/1000/1250)

4) If the code 7 – 15 – 15 – 4 means GOOD then BEST stands for the code

\_\_\_\_\_. (8 – 16 – 16 – 5 / 2 – 5 – 19 – 20 / 3 – 5 – 18 – 20)

5) If  stands for 20 stars then  shows \_\_\_\_\_

stars. (60/80/100)

6) A stick is 4 cm long. If 8 sticks are used to make a square then length of one

side of the square is \_\_\_\_\_ cm. (8/10/12)

**II. Do as directed.**

**(2x5=10)**

1) The cost of a gourd is Rs 36.

What is the cost of

a)  $\frac{1}{2}$  of the gourd ?

b)  $\frac{1}{4}$  of the gourd ?

2) If the cost of 1 dozen of bananas is Rs 60, find the cost of a banana.

(1 dozen = 12 numbers)

3) Observe the pattern and continue.

$$11 + 12 + 13 = 36$$

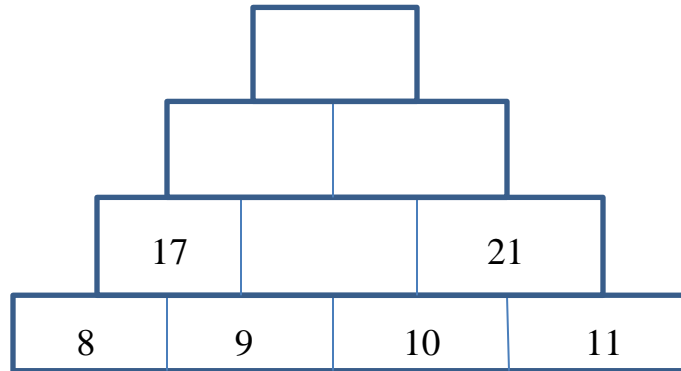
$$21 + 22 + 23 = 66$$

$$31 + 32 + 33 = 96$$

$$\underline{\quad} + \underline{\quad} + \underline{\quad} = \underline{\quad}$$




4) Complete the number tower.

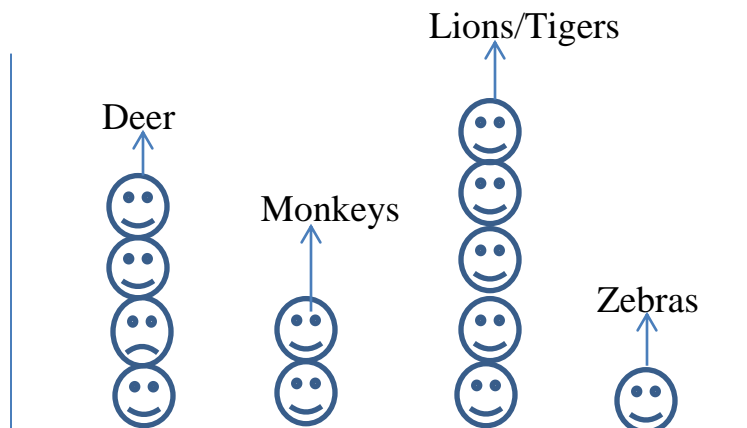


5) Match the following :

- |               |                          |
|---------------|--------------------------|
| a) Division   | i) circle                |
| b) 4 quarters | ii) 64 legs              |
| c) 16 cats    | iii) whole               |
| d) compass    | iv) repeated subtraction |

III. Observe the smart chart and answer the following questions. (1x4=4)

 = 5 children



a) How many children love to watch monkeys ? \_\_\_\_\_

b) Which animals are the favourites for most children ? \_\_\_\_\_

c) How many more children like deer than zebras ? \_\_\_\_\_

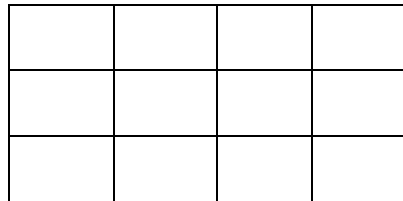
d) Which is less – children who like lions/tigers or  
children who like deer ? \_\_\_\_\_

**Section C : Ability to compute (20 marks)**

**I. Fill in the blanks.**

**(1x4=4)**

1) Shade the given shape as asked.



$\frac{1}{4}$

2) 2 X \_\_\_\_\_ g = 1000 g

3) A rabbit jumps 7 steps at a time starting from 0. After 7 jumps the rabbit reached at \_\_\_\_\_.

4) 9 wheels mean 3 auto-rickshaws. 24 wheels mean \_\_\_\_\_ auto-rickshaws.

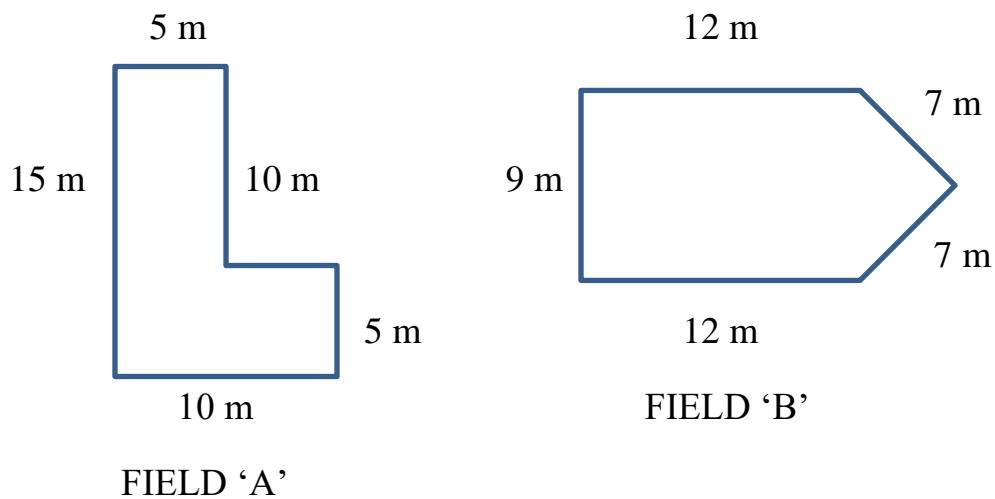
**II. Solve the following.**

**(2x6=12)**

1) Trisha has kept her pigs in a sty. She counted 44 legs. How many pigs are there in the sty ?

2) How many 500 grams weight can balance 2 kg weight ?

3) Find out which field has the longer boundary.



\_\_\_\_\_ has the longer boundary.

4) Out of 56 people in a line for movie tickets,  $\frac{3}{4}$  likes to watch Hindi movies. How many people want to watch Hindi movies ?


5) Use these broken pieces of stones to weigh a fish of 3 kg.



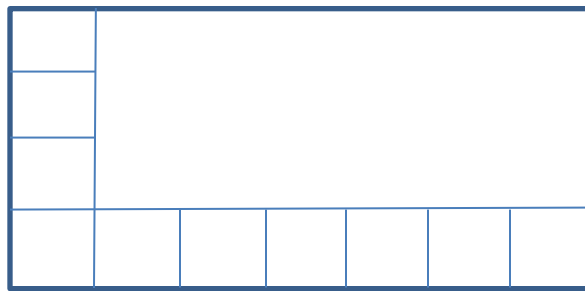
6 kg

5 kg

2 kg



6) How many squares of one centimetre can fill the whole rectangle ? \_\_\_\_\_



**III. Solve.**

**(1x4=4)**


A group of children were asked, which of these festivals they liked the most :

Name of the festival	Number of children
Diwali	22
Eid	11

Christmas	11
-----------	----

Answer the following from the table.

- Total number of children = \_\_\_\_\_
- Children who like Diwali are  $\frac{1}{2}$  or  $\frac{1}{4}$  of the total children. \_\_\_\_\_
- Children who like Christmas are  $\frac{1}{2}$  or  $\frac{1}{4}$  of the total children. \_\_\_\_\_
- Show the liking for festivals on a Chapatti chart.



**Section D : Problem solving (20 marks)**

**I. Choose the correct options.**

**(1x4=4)**

1)  $\frac{3}{4}$  of 1 L = \_\_\_\_\_ ml (500/750)

2)  $99 \times$  \_\_\_\_\_ = 9900 (1000/100)

$\frac{10}{12}$

3)  $\frac{1}{2}$  kg +  $\frac{1}{4}$  kg + 250 g = \_\_\_\_\_ g (1000/1250)

4) 15 notes of 50 rupees = \_\_\_\_\_ rupees (500/750)

**II. Find the answer for the following.**

**(2x6=12)**

1) Divide 195 by 7 and write the

Remainder : \_\_\_\_\_

Quotient : \_\_\_\_\_

2) Name any four things we usually buy in litres.

\_\_\_\_\_, \_\_\_\_\_, \_\_\_\_\_, \_\_\_\_\_

3) Frame your question for the given statement.

Satyam went to a cloth-store to buy 5 metres of cloth. Each metre cost him

Rs 250.

Your Question : \_\_\_\_\_

\_\_\_\_\_

4) How many 500 rupee notes will Ragini get for Rs 2500 ?

5) Rohit had 25 m 15 cm of iron wire. He used 17 m 5 cm of the wire to

fence his garden. How much wire is left with him ?

6) Study the pattern and move it forward.

Rule : The sum increases by 4 each time.

$$6 + 7 + 8 + 9 = 30$$

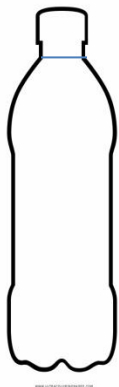
$$7 + 8 + 9 + 10 = 34$$

$$\underline{\hspace{2cm}} = \underline{\hspace{1cm}}$$

$$\underline{\hspace{2cm}} = \underline{\hspace{1cm}}$$

III. Surya poured 1 litre of orange juice into 2 bottles. Bottle 'A' holds  $\frac{1}{4}$  litre of juice. Bottle 'B' holds  $\frac{3}{4}$  litre of juice. **(2x2=4)**

a) Shade the level of milk in each bottle.



Bottle 'A'



Bottle 'B'

b) How much juice does each bottle hold ?

Bottle 'A' : \_\_\_\_\_ ml

Bottle 'B' : \_\_\_\_\_ ml

